

Name : _____

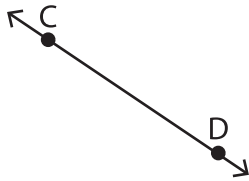
Points, Lines and Planes

Sheet 1


Part - A

Name each figure using symbols.

1)




2)




3)



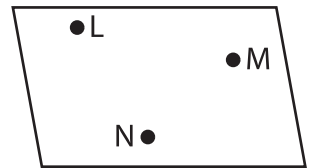
4)



5)



6)



Part - B

Draw and label each of the following.

1) \overleftrightarrow{PQ}

2) Points S and T

3) Plane EFGH