

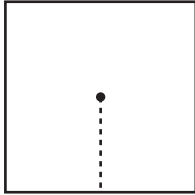
Name : _____

L2S4

Finding Apothem

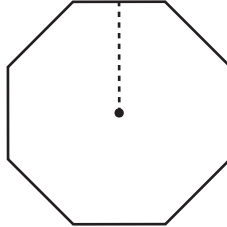
Find the apothem of each polygon using the given information. Round your answer to two decimal places.

1)

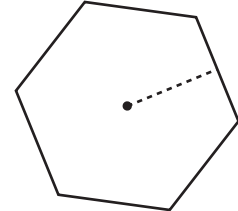


Perimeter = 174 ft
Apothem = _____

2)

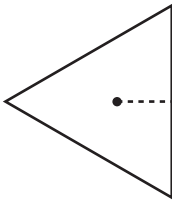


3)



Radius = 23.6 in
Apothem = _____

4)



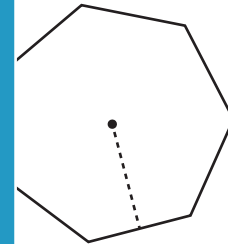
Area = 308.5 in²
Apothem = _____

Gain complete access to the largest collection of worksheets in all subjects!

Members, please log in to download this worksheet.

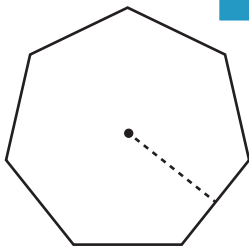
Not a member? Please sign up to gain complete access.

www.mathworksheets4kids.com

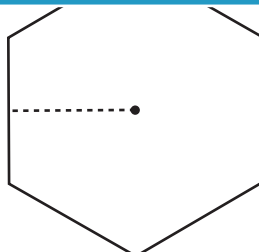


Perimeter = 38.6 yd
Apothem = _____

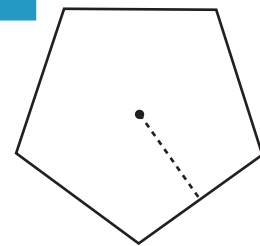
7)



Radius = 13.5 yd
Apothem = _____



Perimeter = 93.2 in
Apothem = _____



Area = 78 ft²
Apothem = _____