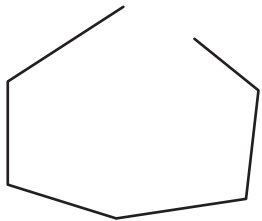


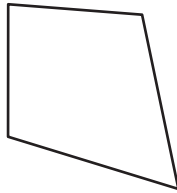
Identifying Polygons

Write whether each figure is a polygon or not a polygon.

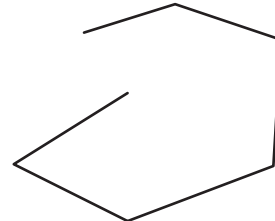
1)




2)



3)



4)



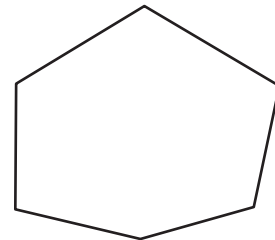
PREVIEW

Gain complete access to the largest collection of worksheets in all subjects!

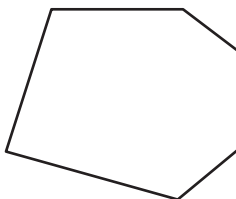
Members, please log in to download this worksheet.

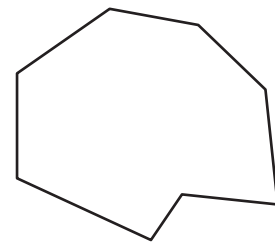
Not a member? Please sign up to gain complete access.

www.mathworksheets4kids.com

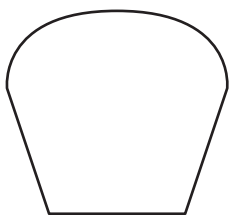


7)

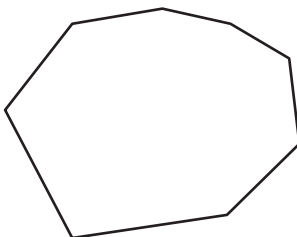




10)



11)



12)