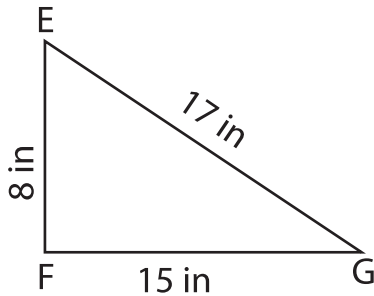


Name : _____

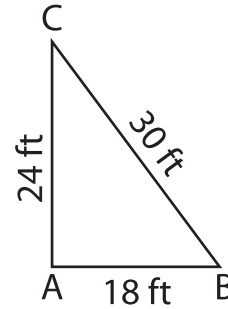
Identify the right triangles

Apply the Pythagorean theorem. Find whether each triangle has a right angle.

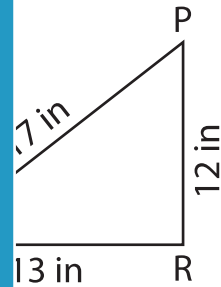
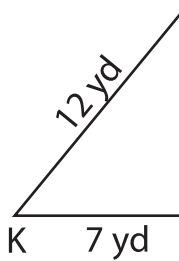
1)



2)



3)



PREVIEW

Gain complete access to the largest collection of worksheets in all subjects!

Members, please log in to download this worksheet.

Not a member? Please sign up to gain complete access.

www.mathworksheets4kids.com

5) In triangle UVW, the sides UV and VW measure 8 yd and 6 yd respectively. Prove that UVW is a right triangle.

6) In triangle LMN, the sides LM, MN and LN measure 9 in, 15 in and 12 in respectively. Prove that LMN is a right triangle.