

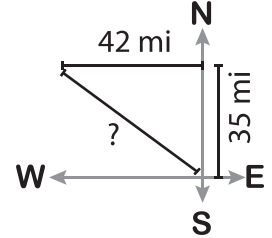
Name : _____

Pythagorean Theorem

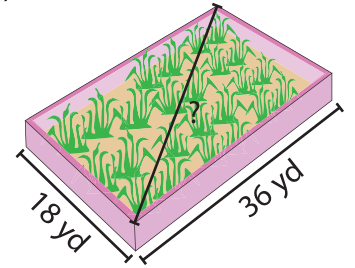
Level 1: S1

Solve the word problems. Round the answer to the nearest tenth.

- 1) Mark is on his way home from work. He drives 35 miles due North and then 42 miles due West. Find the shortest distance he can cover to reach home early.



- 2) Mr. Richard owns an orchard that has a rectangular fence. The orchard is 36 yards long and 18 yards wide. If he walks from one corner to the opposite corner, how much distance would he cover?



- 3) Joey made a sandwich in half as shown in the diagram.

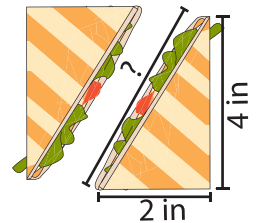
Gain complete access to the largest collection of worksheets in all subjects!

Members, please log in to download this worksheet.

Not a member? Please sign up to gain complete access.

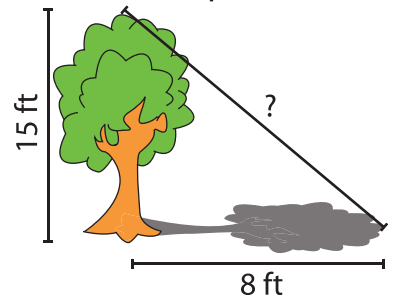
www.mathworksheets4kids.com

- If he cuts the sandwich in half as shown in the diagram, how much distance would he cover?



- 4) A 15 feet tree casts a shadow of 8 feet. How far is the shadow from the tip of the tree to the tip of its shadow?

- How far is the shadow from the tip of the tree to the tip of its shadow?



- 5) Rachel bought a rug for her apartment. The rug is 11 feet long and 9 feet wide. Find the diagonal length of the rug.

