

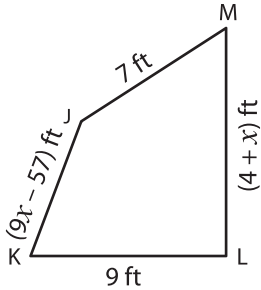
Name: _____

L1S3

Sides of a Quadrilateral

Solve for x and find the indicated side lengths.

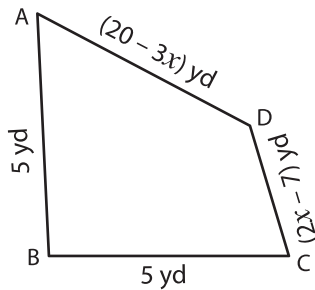
1)



Perimeter = 33 ft ; $x =$ _____

JK = _____ ; LM = _____

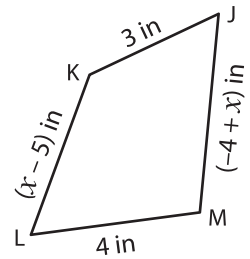
2)



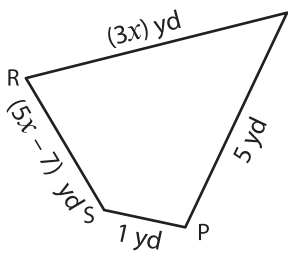
Perimeter = 16 in ; $x =$ _____

L = _____ ; MJ = _____

3)

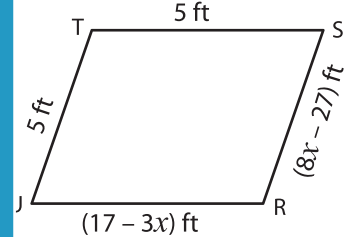


4)



Perimeter = 15 yd ; $x =$ _____

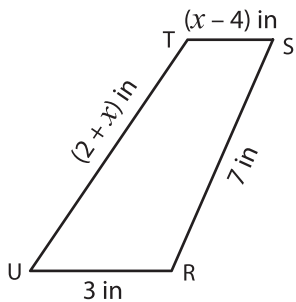
QR = _____ ; SR = _____



Perimeter = 20 ft ; $x =$ _____

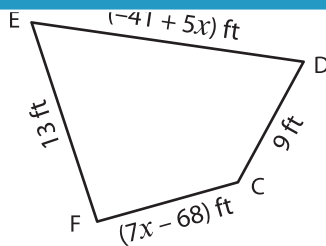
R = _____ ; RS = _____

7)



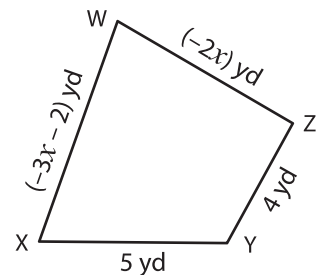
Perimeter = 20 in ; $x =$ _____

TU = _____ ; ST = _____



Perimeter = 45 ft ; $x =$ _____

CF = _____ ; DE = _____



Perimeter = 22 yd ; $x =$ _____

WX = _____ ; WZ = _____

PREVIEW

Gain complete access to the largest collection of worksheets in all subjects!

Members, please log in to download this worksheet.

Not a member? Please sign up to gain complete access.

www.mathworksheets4kids.com