

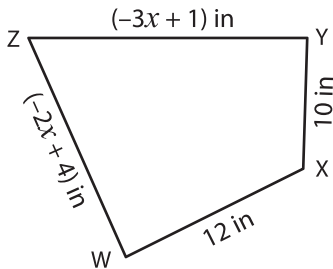
Name: _____

L1S5

Sides of a Quadrilateral

Solve for x and find the indicated side lengths.

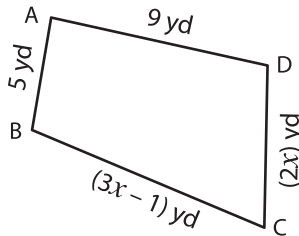
1)



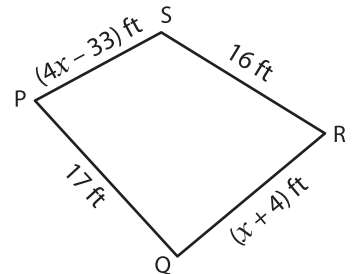
Perimeter = 52 in ; $x =$ _____

WZ = _____ ; YZ = _____

2)



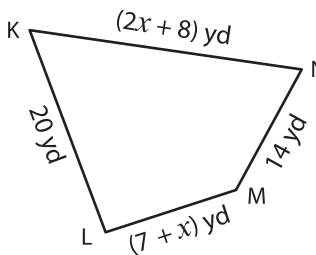
3)



Perimeter = 64 ft ; $x =$ _____

S = _____ ; QR = _____

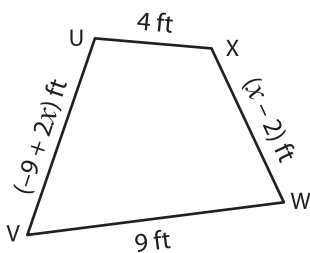
4)



Perimeter = 70 yd ; $x =$ _____

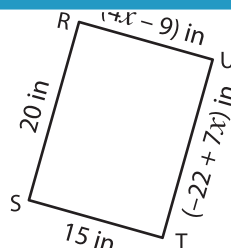
KN = _____ ; LM = _____

7)



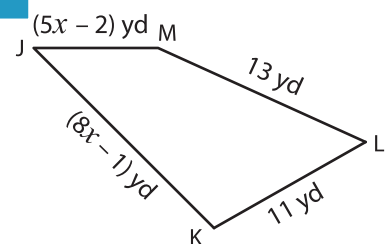
Perimeter = 26 ft ; $x =$ _____

UV = _____ ; WX = _____



Perimeter = 70 in ; $x =$ _____

TU = _____ ; RU = _____



Perimeter = 47 yd ; $x =$ _____

JK = _____ ; JM = _____

PREVIEW

Gain complete access to the largest collection of worksheets in all subjects!

Members, please log in to download this worksheet.

Not a member? Please sign up to gain complete access.

www.mathworksheets4kids.com