

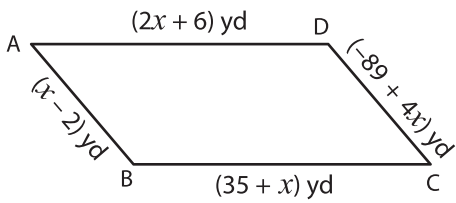
Name: _____

L2S3

Sides of a Quadrilateral

Solve for x and find the indicated side lengths.

1)

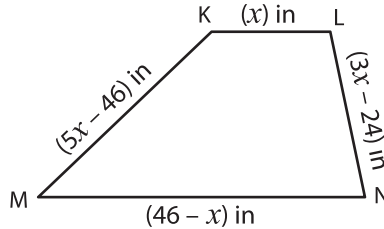


Perimeter = 182 yd ; $x =$ _____

AB = _____ ; BC = _____

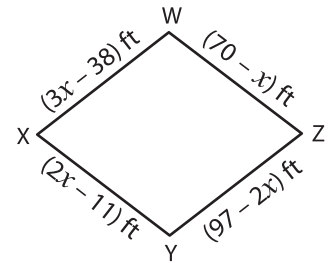
CD = _____ ; AD = _____

2)



Perimeter = 96 in ; $x =$ _____

3)

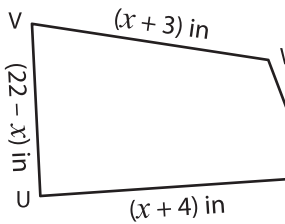


Perimeter = 172 ft ; $x =$ _____

X = _____ ; XY = _____

Z = _____ ; WZ = _____

4)



Perimeter = 47 in ; $x =$ _____

TU = _____ ; UV = _____

VW = _____ ; TW = _____

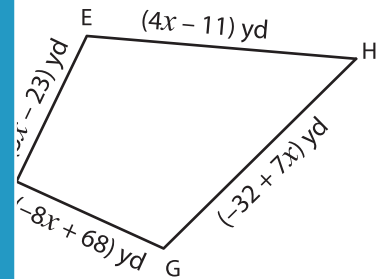
PREVIEW

Gain complete access to the largest collection of worksheets in all subjects!

Members, please log in to download this worksheet.

Not a member? Please sign up to gain complete access.

www.mathworksheets4kids.com

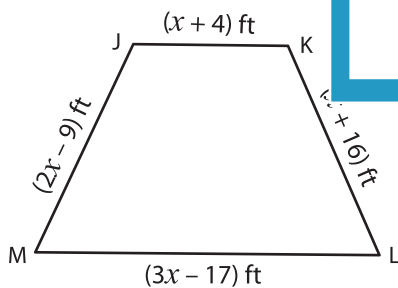


Perimeter = 58 yd ; $x =$ _____

F = _____ ; FG = _____

H = _____ ; EH = _____

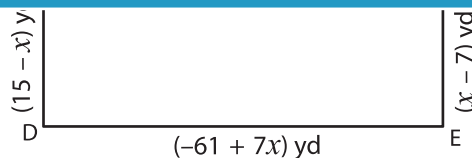
7)



Perimeter = 169 ft ; $x =$ _____

JK = _____ ; KL = _____

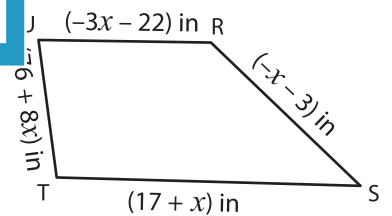
LM = _____ ; JM = _____



Perimeter = 40 yd ; $x =$ _____

CD = _____ ; DE = _____

EF = _____ ; CF = _____



Perimeter = 23 in ; $x =$ _____

RS = _____ ; ST = _____

TU = _____ ; RU = _____