

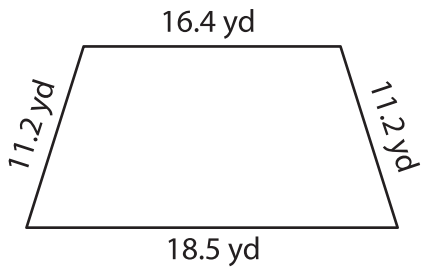
Name : _____

T2S1

Perimeter of a Quadrilateral

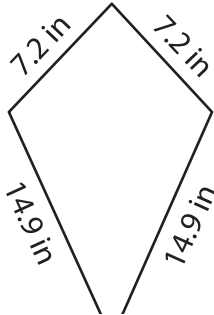
Find the perimeter of each quadrilateral.

1)

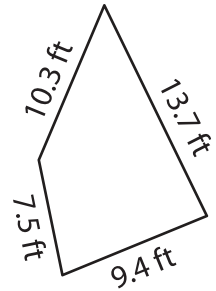


Perimeter = _____

2)

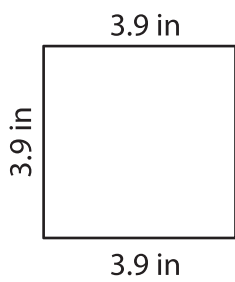


3)



Perimeter = _____

4)



Perimeter = _____

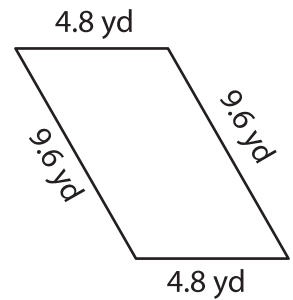
PREVIEW

Gain complete access to the largest collection of worksheets in all subjects!

Members, please log in to download this worksheet.

Not a member? Please sign up to gain complete access.

www.mathworksheets4kids.com



Perimeter = _____

7) Find the perimeter of the

feet.

8) Determine the perimeter of a trapezoid whose side lengths are 13.1 inches, 15.6 inches, 5.9 inches and 9.4 inches.
