

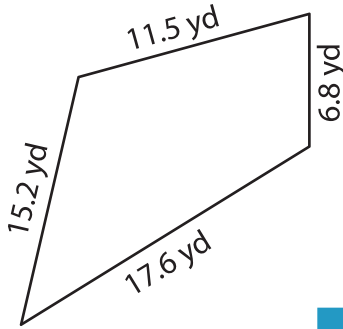
Name : _____

T2S4

Perimeter of a Quadrilateral

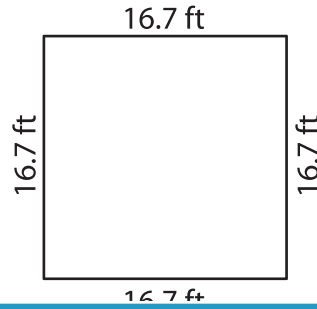
Find the perimeter of each quadrilateral.

1)

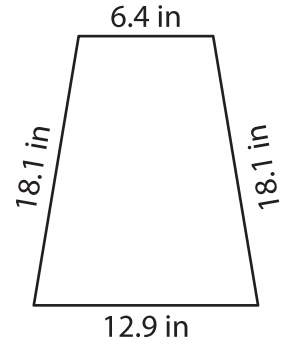


Perimeter = _____

2)

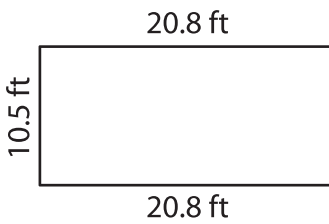


3)



Perimeter = _____

4)



Perimeter = _____

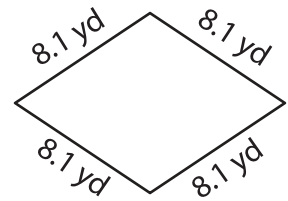
PREVIEW

Gain complete access to the largest collection of worksheets in all subjects!

Members, please log in to download this worksheet.

Not a member? Please sign up to gain complete access.

www.mathworksheets4kids.com



Perimeter = _____

7) Find the perimeter of the

8) The adjacent sides of a parallelogram measure 11.9 inches and 13.5 inches. Determine the perimeter of the parallelogram.
