

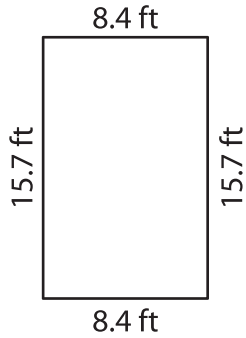
Name : _____

T2S5

Perimeter of a Quadrilateral

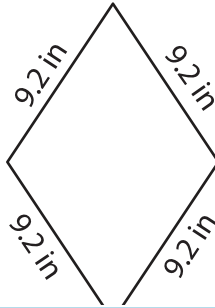
Find the perimeter of each quadrilateral.

1)

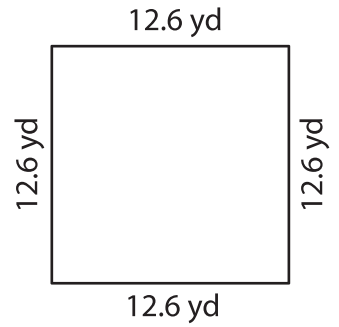


Perimeter = _____

2)

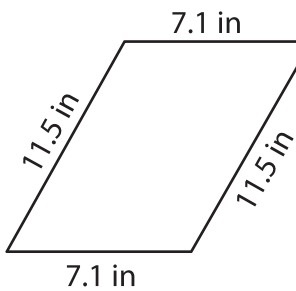


3)



Perimeter = _____

4)



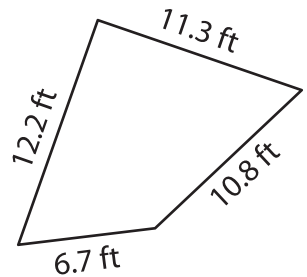
Perimeter = _____

PREVIEW
Gain complete access to the largest collection of worksheets in all subjects!

Members, please log in to download this worksheet.

Not a member? Please sign up to gain complete access.

www.mathworksheets4kids.com



Perimeter = _____

7) The length of a rectangle

is 12.5 inches. Find the perimeter of the rectangle, if the width is 6.9 inches.

8) The side of a rhombus measures 14.7 feet. Find the perimeter of the rhombus.
