

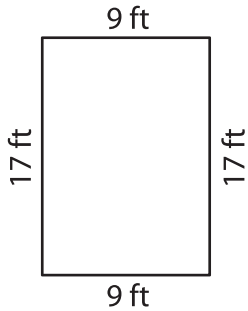
Name : _____

Perimeter of a Quadrilateral

T2L1S2

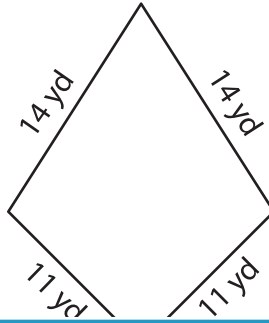
Find the perimeter of each quadrilateral.

1)

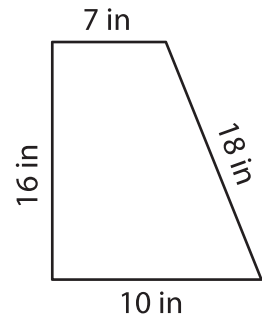


Perimeter = _____

2)

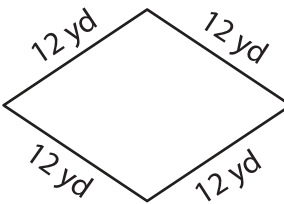


3)



Perimeter = _____

4)



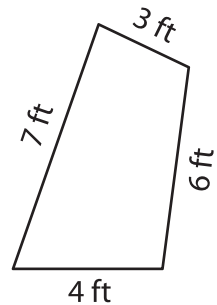
Perimeter = _____

PREVIEW
Gain complete access to the largest collection of worksheets in all subjects!

Members, please log in to download this worksheet.

Not a member? Please sign up to gain complete access.

www.mathworksheets4kids.com



Perimeter = _____

7) The length of a rectangle

is 10 inches. Find the perimeter if the width is 2 inches?

8) Find the perimeter of the kite, if the sides of a kite measure 15 feet and 19 feet.
