

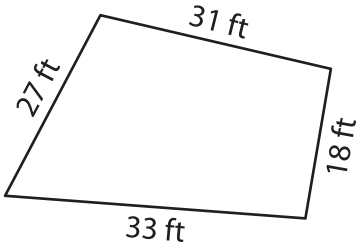
Name : _____

Perimeter of a Quadrilateral

T2L2S2

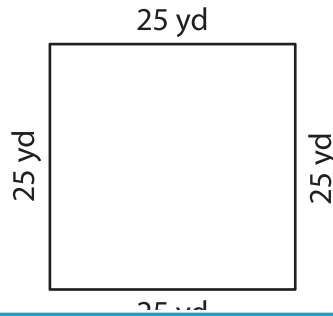
Find the perimeter of each quadrilateral.

1)

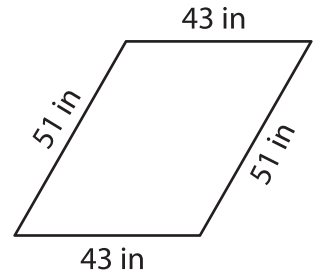


Perimeter = _____

2)

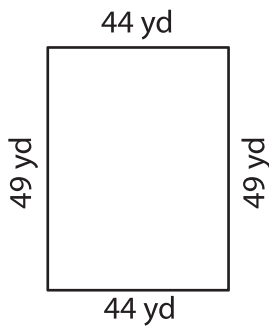


3)



Perimeter = _____

4)



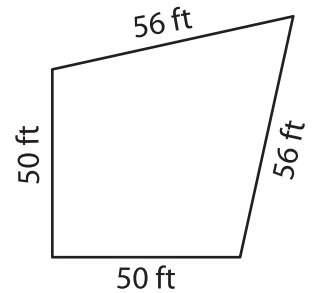
Perimeter = _____

Gain complete access to the largest collection of worksheets in all subjects!

Members, please log in to download this worksheet.

Not a member? Please sign up to gain complete access.

www.mathworksheets4kids.com



Perimeter = _____

7) Find the perimeter of a trapezoid with side lengths 35 inches and 38 inches.

8) The side of a rhombus measures 48 feet. What is the perimeter of the rhombus?
