

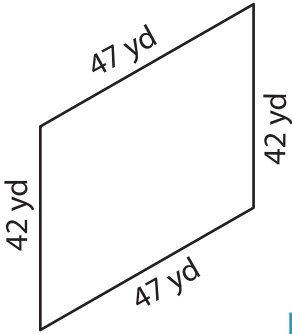
Name : \_\_\_\_\_

## Perimeter of a Quadrilateral

T2L2S4

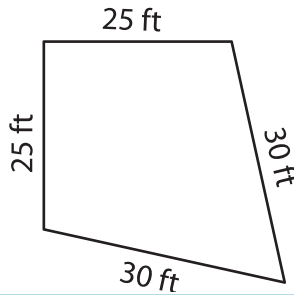
Find the perimeter of each quadrilateral.

1)

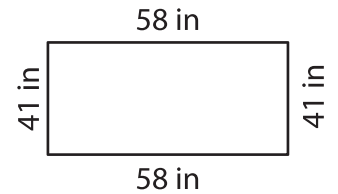


Perimeter = \_\_\_\_\_

2)

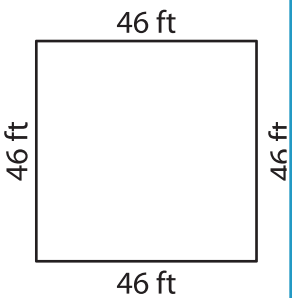


3)



Perimeter = \_\_\_\_\_

4)



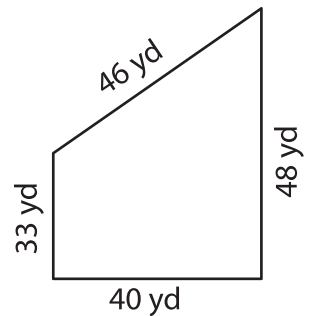
Perimeter = \_\_\_\_\_

**PREVIEW**  
Gain complete access to the largest collection of worksheets in all subjects!

Members, please log in to download this worksheet.

Not a member? Please sign up to gain complete access.

[www.mathworksheets4kids.com](http://www.mathworksheets4kids.com)



Perimeter = \_\_\_\_\_

7) The side of a rhombus m

Perimeter = \_\_\_\_\_

8) The lengths of the adjacent sides of a parallelogram are 32 yards and 37 yards. Find the perimeter of the parallelogram.