

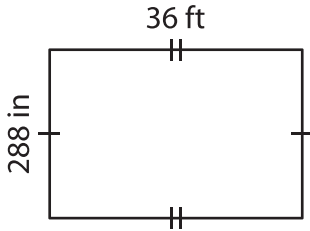
Name : \_\_\_\_\_

# Perimeter of a Quadrilateral

Sheet 1

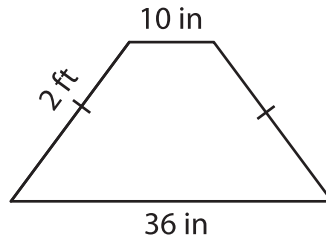
Find the perimeter of each quadrilateral.

1)

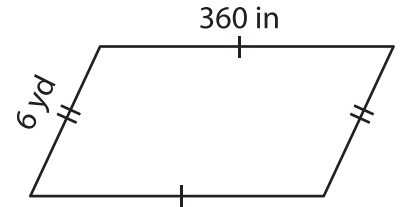


Perimeter = \_\_\_\_\_ f

2)

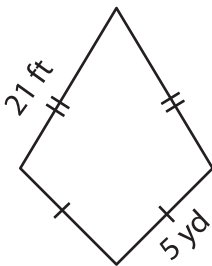


3)



Perimeter = \_\_\_\_\_ yd

4)



Perimeter = \_\_\_\_\_ yd

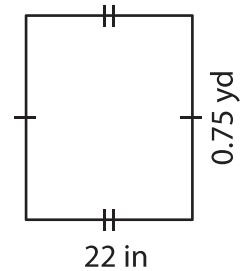
**PREVIEW**

Gain complete access to the largest collection of worksheets in all subjects!

Members, please log in to download this worksheet.

Not a member? Please sign up to gain complete access.

[www.mathworksheets4kids.com](http://www.mathworksheets4kids.com)



Perimeter = \_\_\_\_\_ in

7) The parallel bases of an isosceles trapezoid are 10 feet and 20 feet. Each leg measures 10 feet, determine the perimeter.

Perimeter = \_\_\_\_\_ feet

\_\_\_\_\_ feet

8) If the sides of a parallelogram measure 14 inches and 0.5 yards. What is the perimeter of the parallelogram?

\_\_\_\_\_ inches