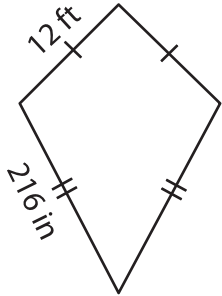


Name : _____

Perimeter of a Quadrilateral

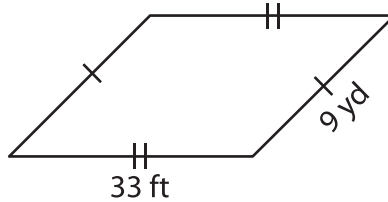
Find the perimeter of each quadrilateral.

1)

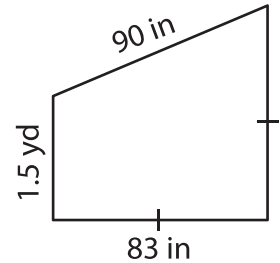


Perimeter = _____ f

2)

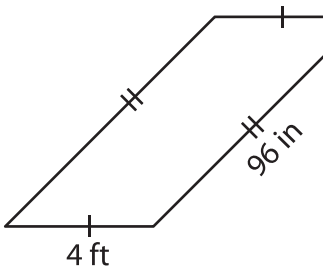


3)



Perimeter = _____ in

4)



Perimeter = _____ i

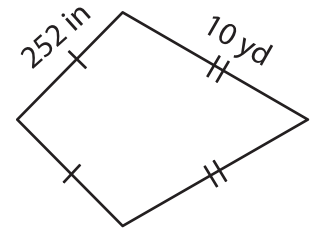
PREVIEW

Gain complete access to the largest collection of worksheets in all subjects!

Members, please log in to download this worksheet.

Not a member? Please sign up to gain complete access.

www.mathworksheets4kids.com



Perimeter = _____ yd

7) Find the perimeter of the

_____ inches

8) What is the perimeter of the rectangle, if the width of a rectangle is 72 feet and the height is 41 yards?

_____ yards