

Name : _____

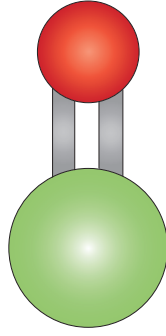
Molecules or Compounds

Cut out the structures. Sort them as molecules of elements and molecules of compounds. Glue them in the appropriate columns.

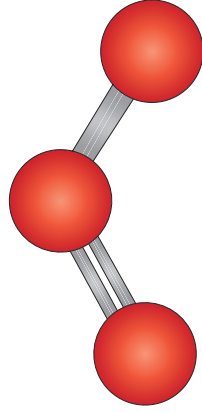
Molecules of Elements	Molecules of Compounds
<div data-bbox="507 1666 911 2114"></div> <div data-bbox="507 1155 911 1603"></div>	<div data-bbox="507 636 911 1084"></div> <div data-bbox="507 125 911 573"></div> <div data-bbox="1043 1666 1447 2114"></div> <div data-bbox="1043 1155 1447 1603"></div> <div data-bbox="1043 636 1447 1084"></div> <div data-bbox="1043 125 1447 573"></div>

Name : _____

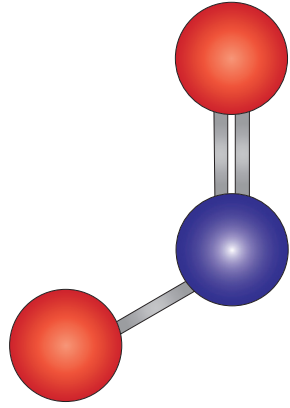
Molecules or Compounds




CaO



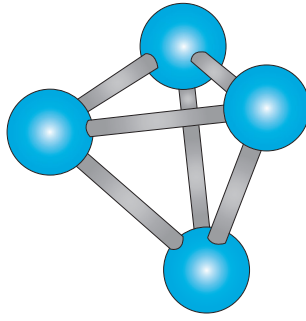
O₃



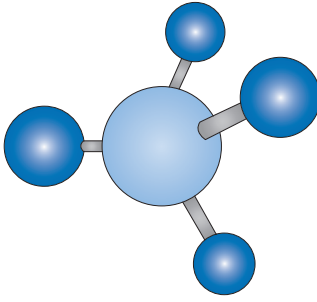
NO₂



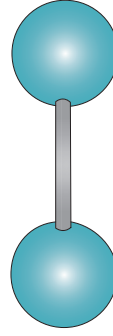
Cl₂



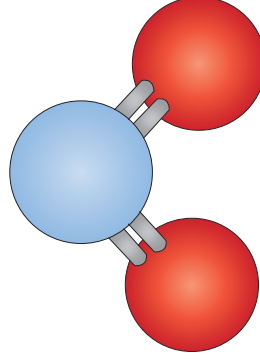
P₄



CH₄



F₂



CO₂