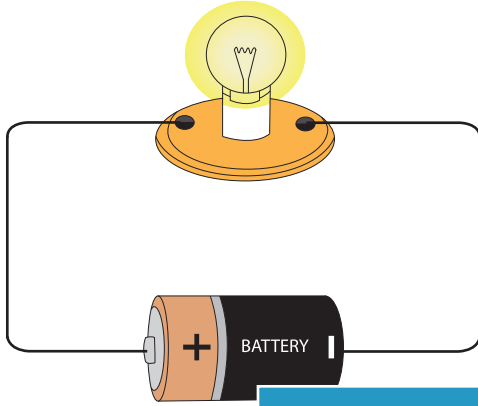


Name : _____

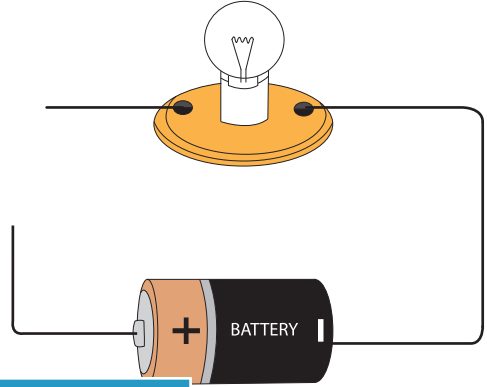
Open and Closed Circuits

Examine each electric circuit and write whether the bulb(s) 'will light' or 'will not light'.

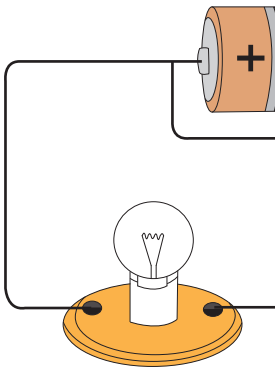
1)



2)



3)




Gain complete access to the largest collection of worksheets in all subjects!

Members, please log in to download this worksheet.

Not a member? Please sign up to gain complete access.

www.mathworksheets4kids.com



5)

