

Name : \_\_\_\_\_

## PUSH AND PULL

Identify the force applied in each scenario. Write "push" or "pull" in the blank as appropriate.


1)



Little Nathan is sitting in the stroller and is on his way to the park along with Mom. What force does Mom use to move the stroller?

\_\_\_\_\_

2)



Mr. Harrison, the manager, rings the buzzer to call the secretary to his office. Name the force applied to ring

# PREVIEW

Gain complete access to the largest collection of worksheets in all subjects!


Members, please log in to download this worksheet.

Not a member? Please sign up to gain complete access.

[www.mathworksheets4kids.com](http://www.mathworksheets4kids.com)

battery, so he decides does he apply?

3)




game of football. Ron n? What force should

4)




to move the cart

5)



\_\_\_\_\_

6)



Name the force that James and Brian apply as they play tug of war.

\_\_\_\_\_