

## Materials and Properties

Check the object that exhibits the specified property.




1) Identify the object with the softest texture.





road
teddy bear
rock

2) Which object is the smallest?

coin
table
ball

3) Which is the most flexible?




ruler
glass

4) Identify the hardest material.




sweater
feather

5) Which is the stickiest?




water
honey

6) Identify the item with the strongest smell.




rose
rubber duck

7) Which of these can be stretched?





house
towel
rubber band

8) Identify the least fragile item.





door
mirror
plate

PREVIEW

Gain complete access to the largest collection of worksheets in all subjects!

Members, please log in to download this worksheet.

Not a member? Please sign up to gain complete access.

[www.mathworksheets4kids.com](http://www.mathworksheets4kids.com)