

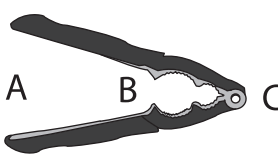
Name : \_\_\_\_\_

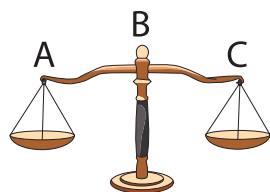
# Three Classes of Levers

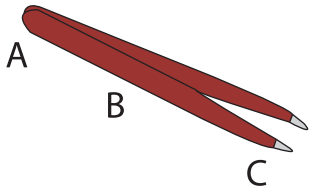
Identify the class of each lever and label the parts.

	Type : _____	A. _____ B. _____ C. _____
---	-----------------	----------------------------------

		A. _____ _____ _____ _____
---	--	-------------------------------------

		_____ _____ _____ _____
---	--	----------------------------------

		_____ _____ _____ _____
---	--	----------------------------------

	Type : _____	B. _____ C. _____
---	-----------------	----------------------

	Type : _____	A. _____ B. _____ C. _____
---	-----------------	----------------------------------

**PREVIEW**

Gain complete access to the largest collection of worksheets in all subjects!

Members, please log in to download this worksheet.

Not a member? Please sign up to gain complete access.

[www.mathworksheets4kids.com](http://www.mathworksheets4kids.com)