

Name : _____

Skip Count -10s to 100s

Sheet 4

1) Count by 20s. How many balls are there altogether?







20



40



2) Count by 50s. How many apples are there altogether?



PREVIEW

Gain complete access to the largest collection of worksheets in all subjects!

Members, please log in to download this worksheet.

Not a member? Please sign up to gain complete access.

www.mathworksheets4kids.com

3) Count by 25s. How many candies are there altogether?

