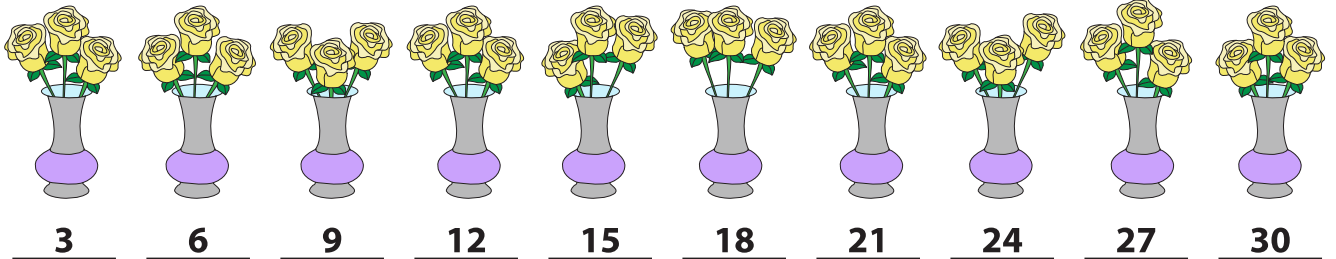


Name : _____


Skip Count - 2s to 5s

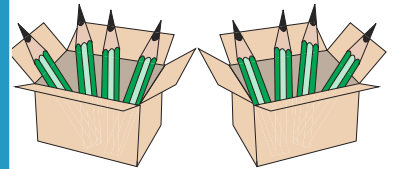
Sheet 2

1) Count by 3s. How many flowers are there in all?




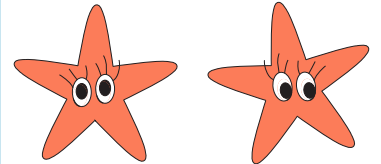
2) Count by 4s. How many pencils are there in total?







3) Count by 5s. How many stars are there in all?






4) Count by 3s. How many pizzas are there in all?





5) Count by 2s. How many bat wings are there altogether?









PREVIEW

Gain complete access to the largest collection of worksheets in all subjects!

Members, please log in to download this worksheet.

Not a member? Please sign up to gain complete access.

www.mathworksheets4kids.com