



Name : \_\_\_\_\_

### Skip Count - 6s to 12s


1) Count by 10s. How many onions are there in total?




\_\_\_\_\_ **10** \_\_\_\_\_



\_\_\_\_\_ **20** \_\_\_\_\_



\_\_\_\_\_



\_\_\_\_\_

2) Count by 7s. How many pearls are there in all?



\_\_\_\_\_



\_\_\_\_\_

# PREVIEW

Gain complete access to the largest collection of worksheets in all subjects!

Members, please log in to download this worksheet.

Not a member? Please sign up to gain complete access.

[www.mathworksheets4kids.com](http://www.mathworksheets4kids.com)

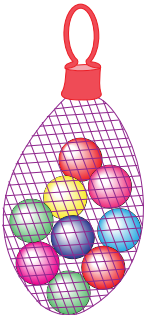


\_\_\_\_\_




\_\_\_\_\_


3) Count by 9s. How many marbles are there in all?




\_\_\_\_\_



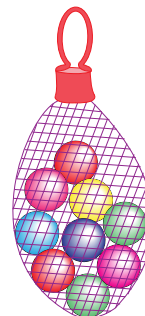
\_\_\_\_\_



\_\_\_\_\_



\_\_\_\_\_



\_\_\_\_\_