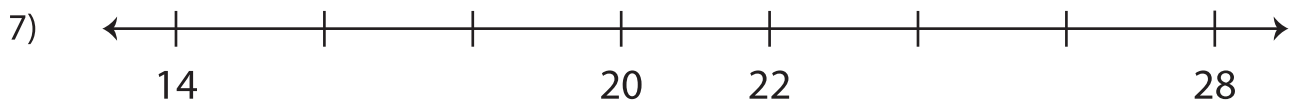
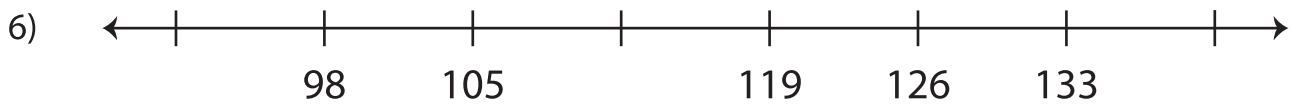
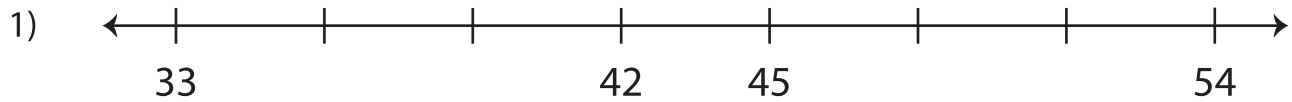


Name : _____

Number Line: Skip Count - 2s to 10s

Sheet 3

Skip count to complete each number line.



PREVIEW

Gain complete access to the largest
collection of worksheets in all subjects!

Members, please
log in to
download this
worksheet.

Not a member?
Please sign up to
gain complete
access.

www.mathworksheets4kids.com