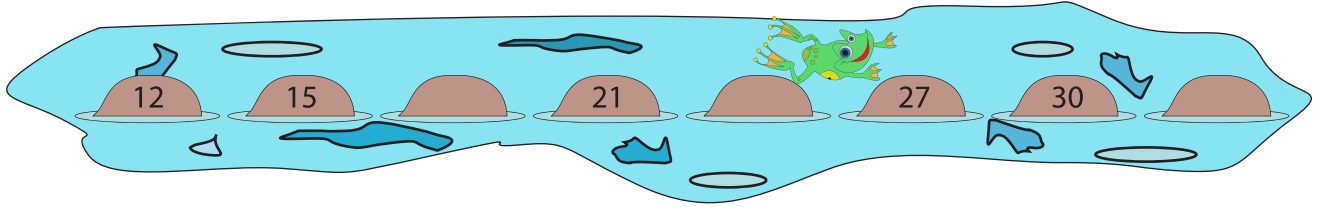


Name : _____

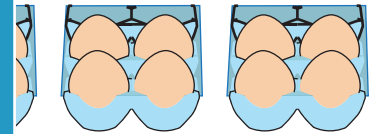
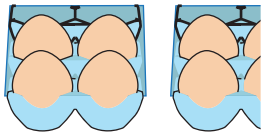
Skip Count - 2s to 5s

Sheet 1

- 1) Fred, the frog leaps by 3s. He missed a few rocks. Count by 3s to fill in the missing numbers. Does the number 33 fit in the sequence?



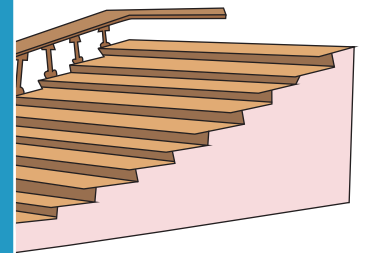
- 2) There are 8 egg crates. Each crate holds 4 eggs. How many eggs are there in all?




- 3) Janice hops 6 times. How many steps did she hop?

Gain complete access to the largest collection of worksheets in all subjects!


By how many steps



- 4) Help Tina complete the number line. Identify the number 64.



ing backwards from



Members, please log in to download this worksheet.

Not a member? Please sign up to gain complete access.

www.mathworksheets4kids.com

- 5) Alex has eight 5 dollar bills in his pocket. How many dollars does he have in total?

