

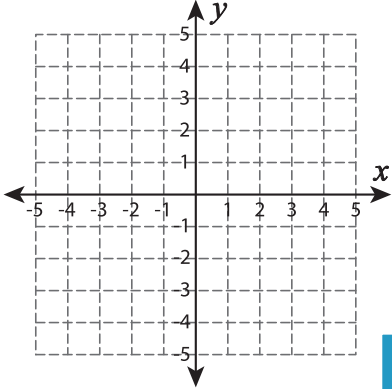
Name : _____

Find the Slope

Sheet 5

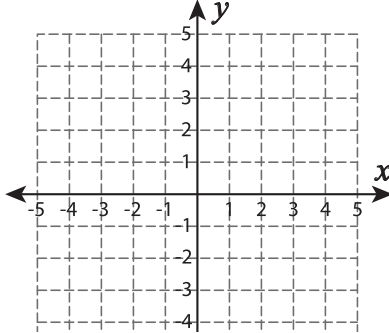
Graph a line through the given pair of points. Find the slope.

1) x-intercept=-3, y-intercept=-4

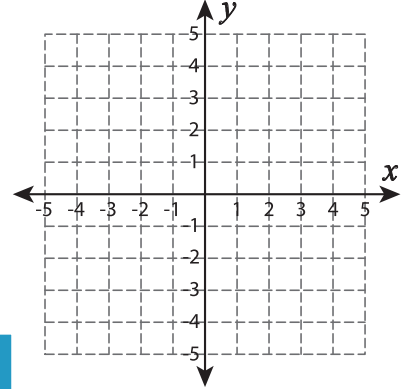


Slope = _____

2) (0, 5) and (-2, 1)

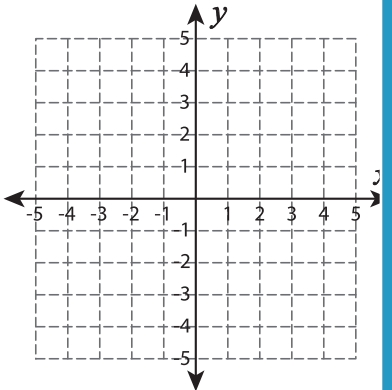


3) (2, 0) and (0, -3)



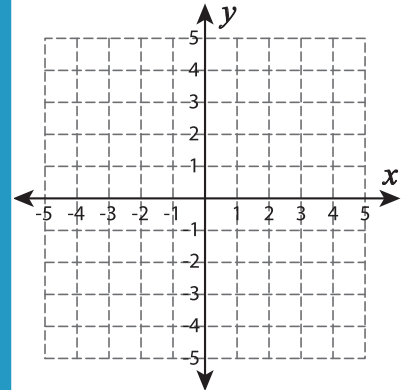
Slope = _____

4) (2, 5) and (0, 1)



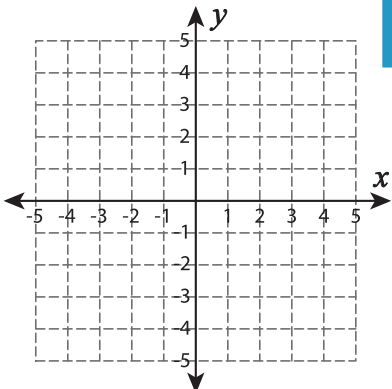
Slope = _____

(5, -5) and (-1, 2)

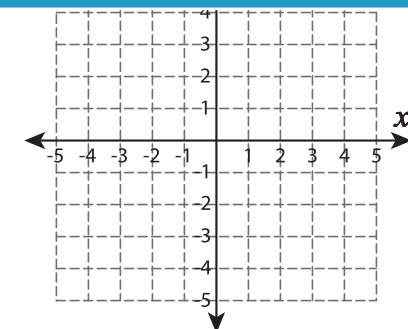


Slope = _____

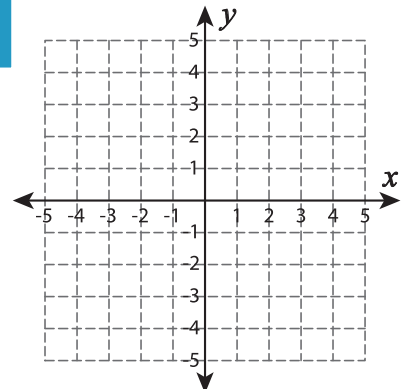
7) (5, 1) and (0, 4)



Slope = _____



Slope = _____



Slope = _____

PREVIEW

Gain complete access to the largest collection of worksheets in all subjects!

Members, please log in to download this worksheet.

Not a member? Please sign up to gain complete access.

www.mathworksheets4kids.com