

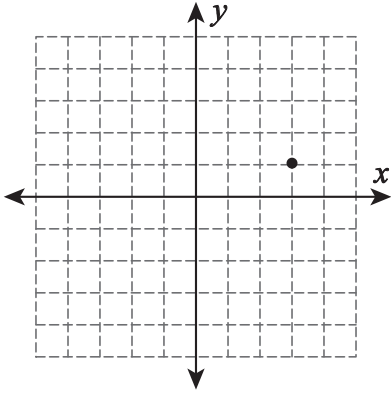
Name : _____

Graphing

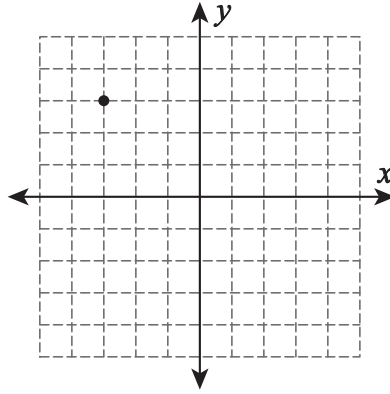
Sheet 1

Draw a line through the point for the given slope.

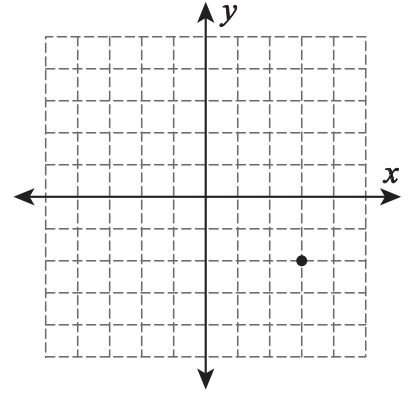
1) Slope = $\frac{2}{5}$



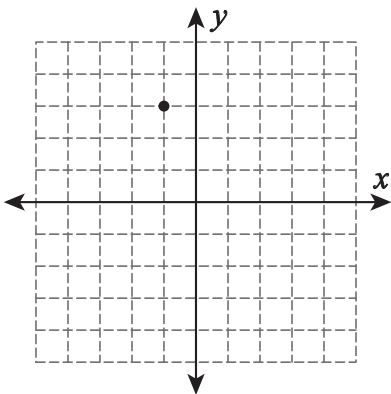
2) Slope = $-\frac{4}{7}$



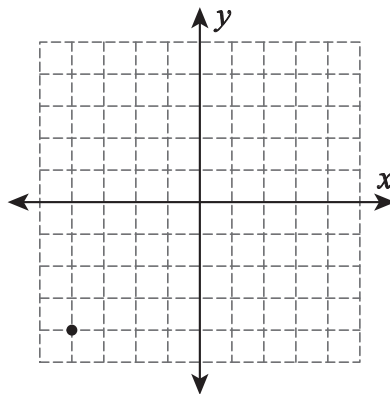
3) Slope = $\frac{1}{6}$



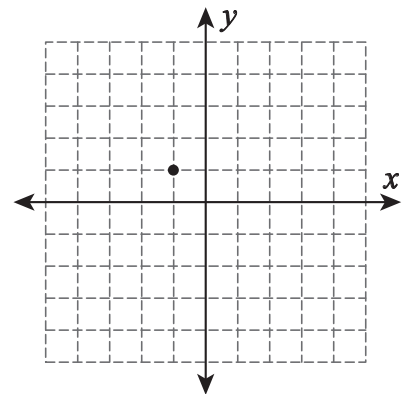
4) Slope = $-\frac{7}{4}$



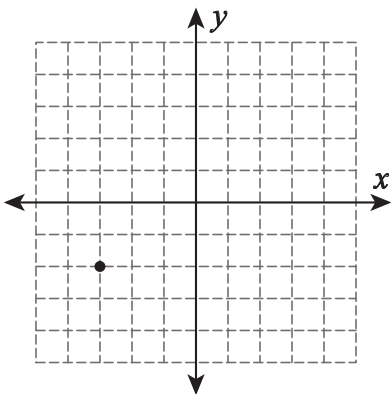
5) Slope = $\frac{3}{8}$



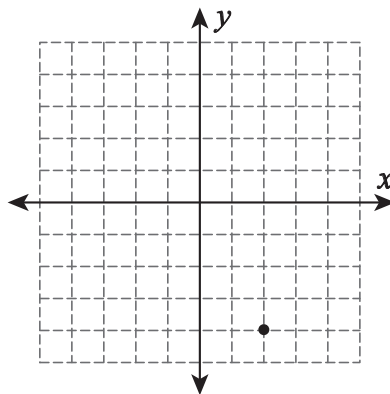
6) Slope = $-\frac{5}{2}$



7) Slope = $\frac{3}{2}$



8) Slope = $-\frac{8}{5}$



9) Slope = $\frac{1}{3}$

