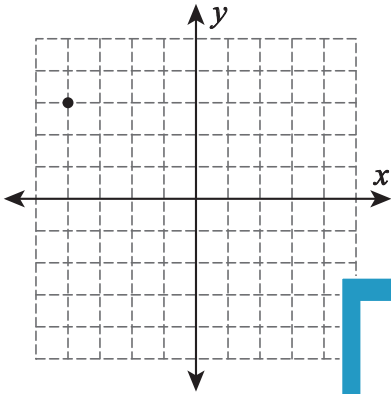


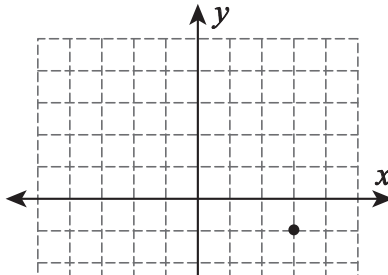
# Graphing

Draw a line through the point for the given slope.

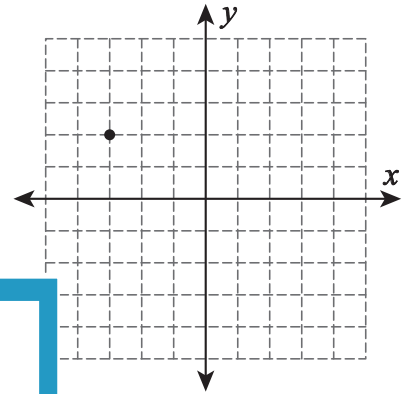
1) Slope =  $-\frac{5}{8}$



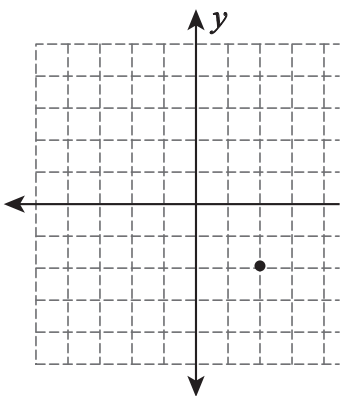
2) Slope =  $\frac{1}{2}$



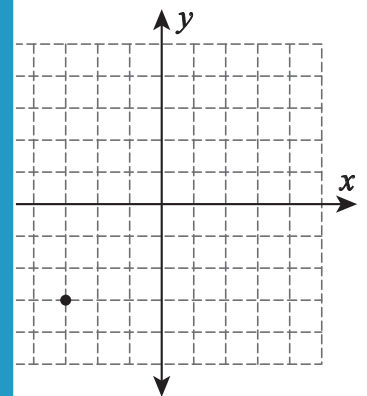
3) Slope =  $-\frac{6}{5}$



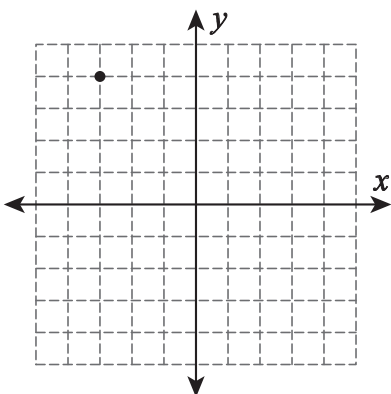
4) Slope =  $\frac{2}{3}$



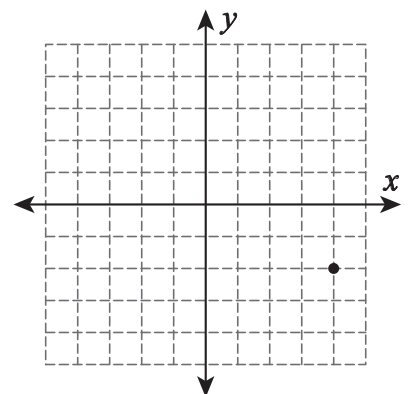
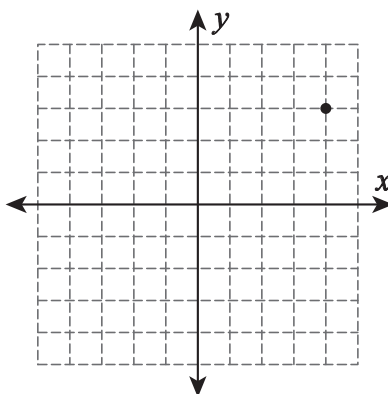
Slope =  $\frac{1}{7}$



7) Slope =  $-\frac{7}{5}$



Slope =  $-\frac{5}{9}$



# PREVIEW

Gain complete access to the largest collection of worksheets in all subjects!

Members, please log in to download this worksheet.

Not a member? Please sign up to gain complete access.

[www.mathworksheets4kids.com](http://www.mathworksheets4kids.com)