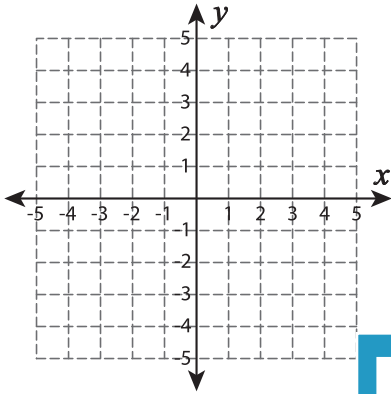


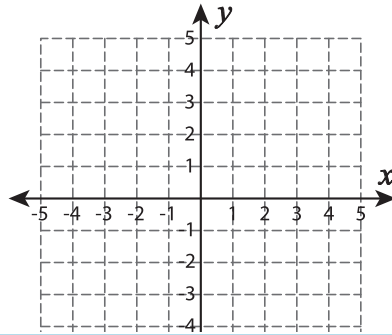
## Types of Slopes

A) Draw a line through the given coordinates and identify the types of slopes.

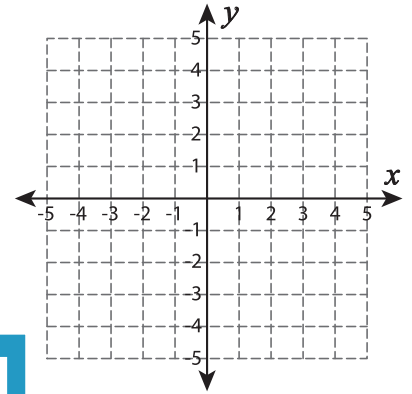
1)  $(-1, 0)$  and  $(5, 0)$



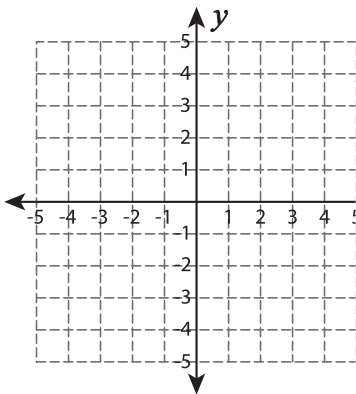
2)  $(-4, -3)$  and  $(2, 4)$



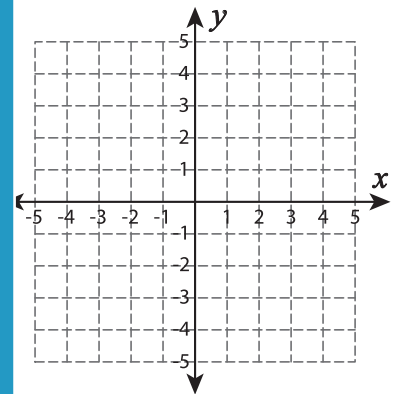
3)  $(2, -1)$  and  $(-3, 3)$



4)  $(-2, -3)$  and  $(0, 1)$



5)  $(1, 3)$  and  $(1, -4)$



# PREVIEW

Gain complete access to the largest  
collection of worksheets in all subjects!

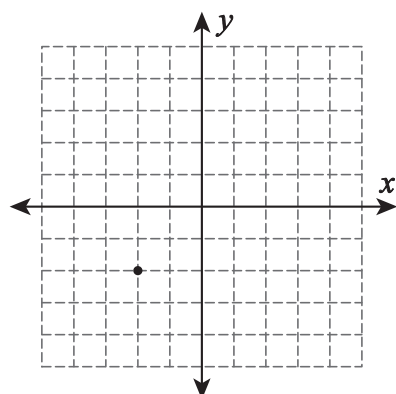
Members, please  
log in to  
download this  
worksheet.

Not a member?  
Please sign up to  
gain complete  
access.

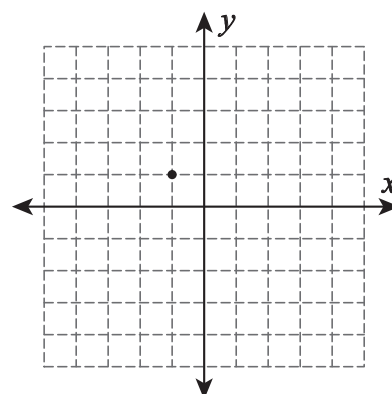
[www.mathworksheets4kids.com](http://www.mathworksheets4kids.com)

B) Draw a line through

1) Undefined slope



2) Positive slope



3) Negative slope

