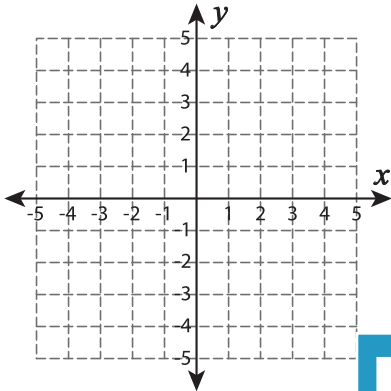


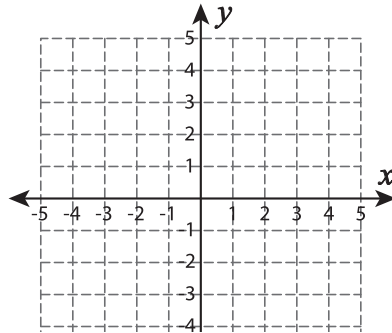
Types of Slopes

A) Draw a line through the given coordinates and identify the types of slopes.

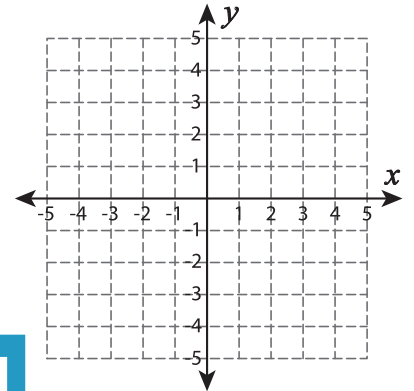
1) $(-1, -2)$ and $(1, 2)$



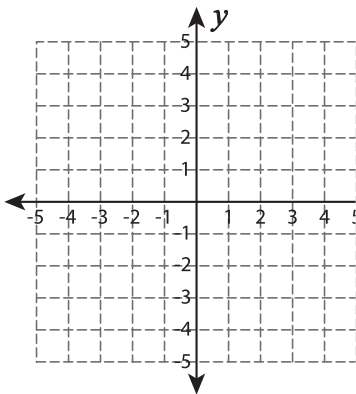
2) $(-1, 3)$ and $(-1, -1)$



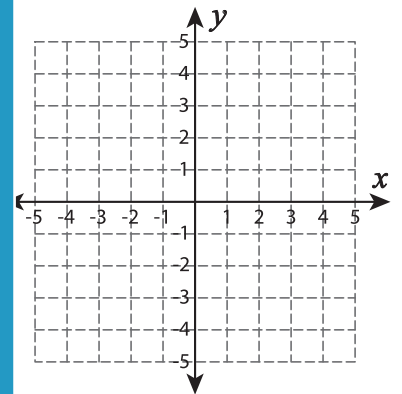
3) $(-3, 4)$ and $(0, -3)$



4) $(0, -4)$ and $(-5, -1)$



5) $(-4, -3)$ and $(1, 5)$



PREVIEW

Gain complete access to the largest
collection of worksheets in all subjects!

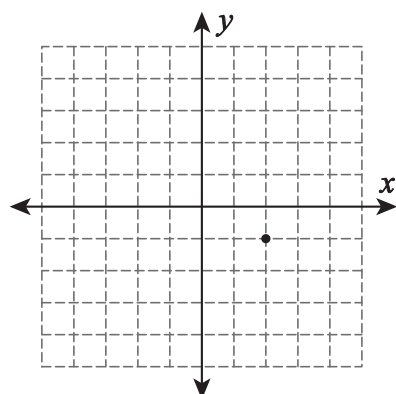
Members, please
log in to
download this
worksheet.

Not a member?
Please sign up to
gain complete
access.

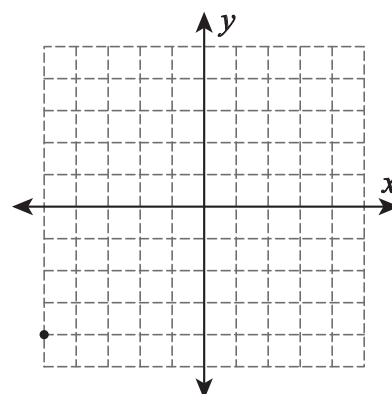
www.mathworksheets4kids.com

B) Draw a line through

1) Positive slope



2) Undefined slope



3) Zero slope

