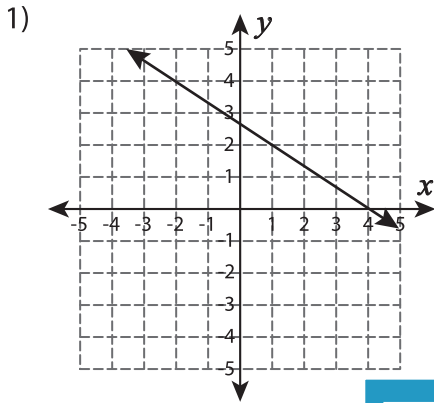


Name: \_\_\_\_\_

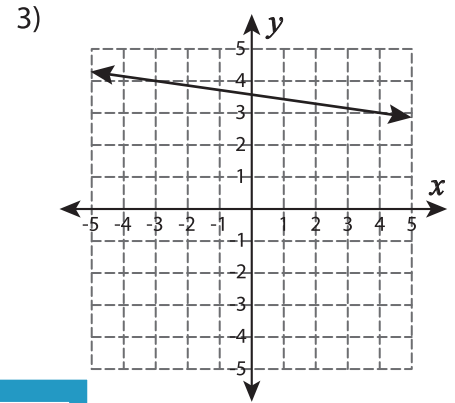
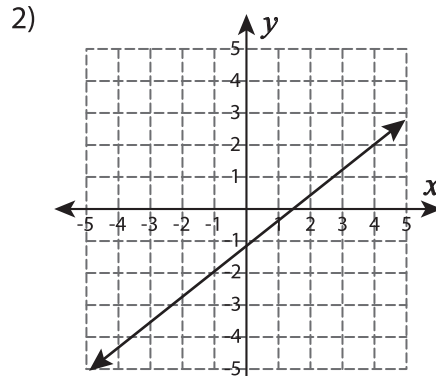
Level 2: S1

## Find the Slope

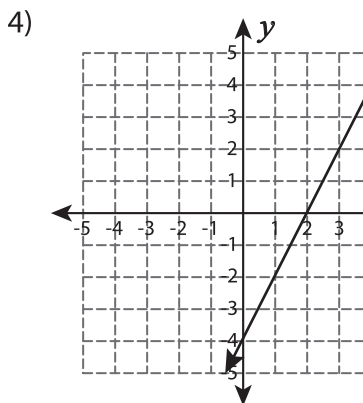
Calculate the rise and run between any two coordinates to find the slope of each line.



Slope = \_\_\_\_\_



Slope = \_\_\_\_\_



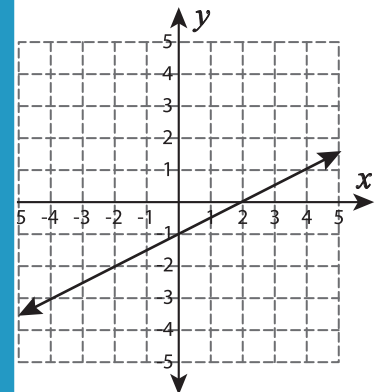
Slope = \_\_\_\_\_

Gain complete access to the largest collection of worksheets in all subjects!

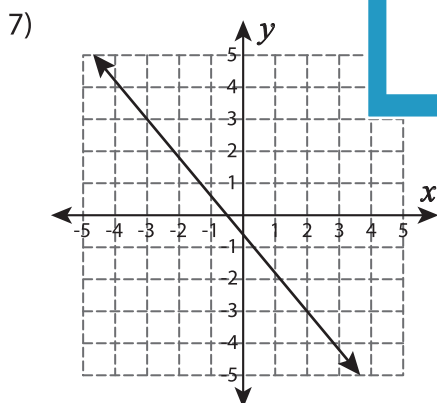
Members, please log in to download this worksheet.

Not a member? Please sign up to gain complete access.

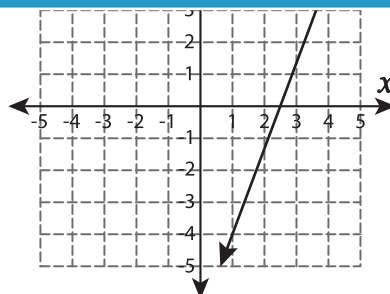
[www.mathworksheets4kids.com](http://www.mathworksheets4kids.com)



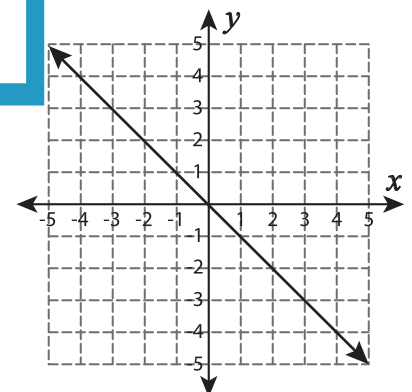
Slope = \_\_\_\_\_



Slope = \_\_\_\_\_



Slope = \_\_\_\_\_



Slope = \_\_\_\_\_