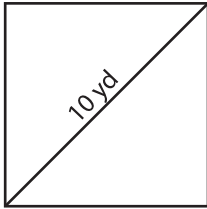


Name : _____

Area of a Square

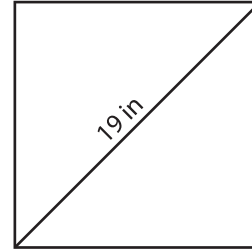
A) Find the area of each square. Round your answer to the nearest hundredth.

1)



Area = _____

2)



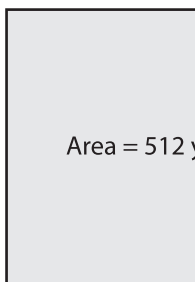
Area = _____

3) The diagonal of a square is 10 cm. What is the area of the square?

4) What is the area of a square with a diagonal of 10 cm?

B) Find the length of the diagonal of a square with the given area.

5)



Diagonal = _____

6) Find the area of a square with a diagonal of 10 cm. Round your answer to the nearest tenth.



7) The area of a square is 283.22 square feet. Determine the length of the diagonal.

8) If the area of a square is 637.25 square inches, what is the length of the diagonal?

PREVIEW

Gain complete access to the largest collection of worksheets in all subjects!

Members, please log in to download this worksheet.

Not a member? Please sign up to gain complete access.

www.mathworksheets4kids.com