


Name : _____

Area of a Square

T1S2

Find the area of each square.


1)



3.9 in

Area =

2)




6.4 ft

3)



2.8 yd

4)



12.1 yd

Area =

Gain complete access to the largest collection of worksheets in all subjects!

Members, please log in to download this worksheet.

Not a member? Please sign up to gain complete access.

www.mathworksheets4kids.com

5.7 ft




7)




11.2 ft

Area =



8.8 yd

Area =



9.5 in

Area =