

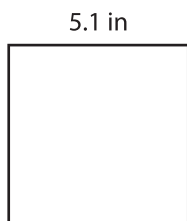
Name : _____

Area of a Square

T1S4


Find the area of each square.

1)

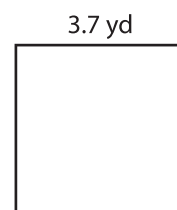


Area =

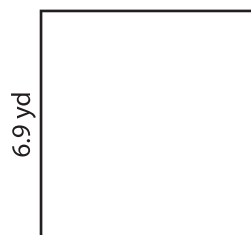
2)



3)



4)




Area =

PREVIEW
Gain complete access to the largest
collection of worksheets in all subjects!

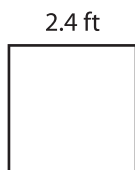
Members, please
log in to
download this
worksheet.

Not a member?
Please sign up to
gain complete
access.

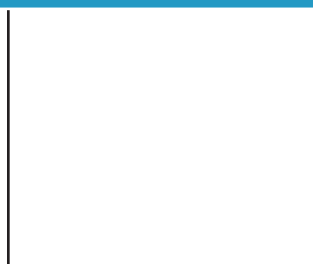
www.mathworksheets4kids.com



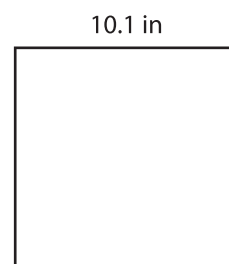
7)



Area =



Area =



Area =