

Name : _____

Area of a Square

T1S2

Find the area of each square.


1)

$\frac{1}{2}$ in



Area =

2)



$1\frac{2}{7}$ yd


Area =

3)

$\frac{5}{3}$ ft



4)



$3\frac{1}{2}$ yd

Area =


PREVIEW
Gain complete access to the largest collection of worksheets in all subjects!

Members, please log in to download this worksheet.

Not a member? Please sign up to gain complete access.

www.mathworksheets4kids.com

$\frac{11}{5}$ in



Area =

7)

$\frac{16}{7}$ ft



Area =

$\frac{3}{4}$ yd



Area =

$\frac{4}{5}$ in



Area =