


Name : _____

T1L2S1

Area of a Square

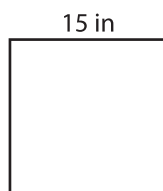
Find the area of each square.

1)




Area =

2)




Area =

3)



4)



Area =

PREVIEW
Gain complete access to the largest
collection of worksheets in all subjects!

Members, please
log in to
download this
worksheet.

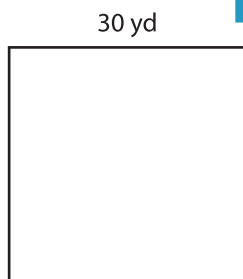
Not a member?
Please sign up to
gain complete
access.

www.mathworksheets4kids.com




Area =


7)



Area =



Area =



Area =