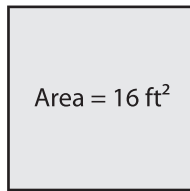


Name : _____

Area of a Square

Example :



$$\text{Area} = \text{Side} \times \text{Side}$$

$$16 \text{ ft}^2 = \text{Side}^2$$

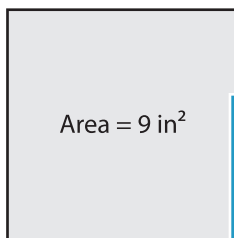
$$\sqrt{16} = \text{Side}$$

$$\text{Side} = \mathbf{4 \text{ ft}}$$

Ans = 4 ft

Find the side length of each square.

1)

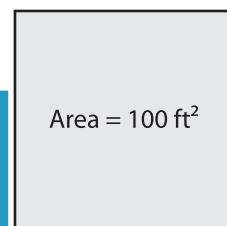


Side length =

2)

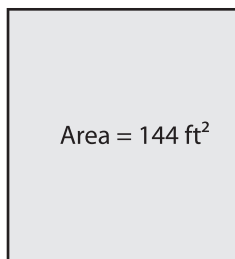


3)



Side length =

4)



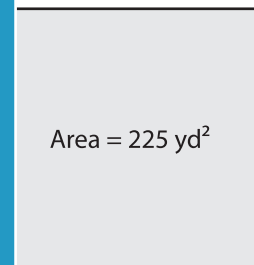
Side length =

PREVIEW
Gain complete access to the largest
collection of worksheets in all subjects!

Members, please
log in to
download this
worksheet.

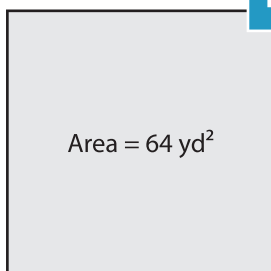
Not a member?
Please sign up to
gain complete
access.

www.mathworksheets4kids.com

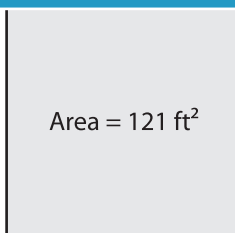


Side length =

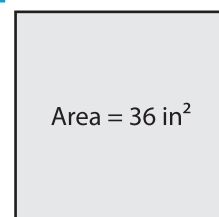
7)



Side length =



Side length =



Side length =