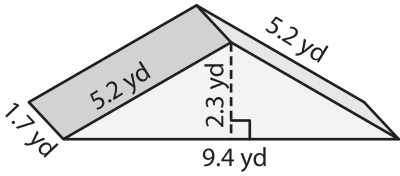


Name : \_\_\_\_\_

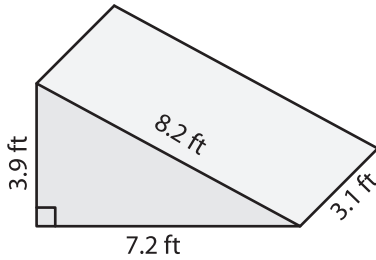
# Surface Area - Triangular Prisms

Find the surface area of each triangular prism.

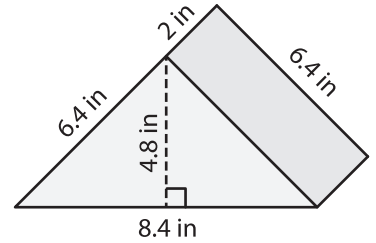
1)



2)



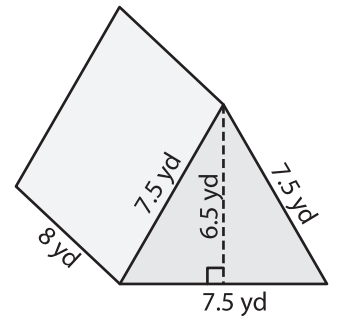
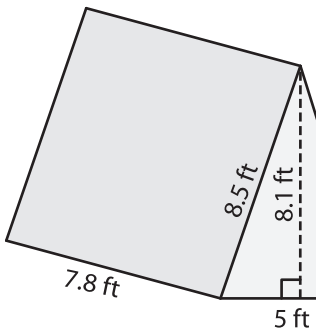
3)



Surface Area = \_\_\_\_\_

Surface Area = \_\_\_\_\_

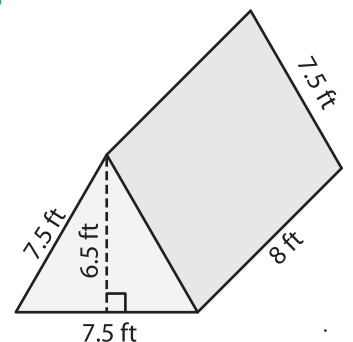
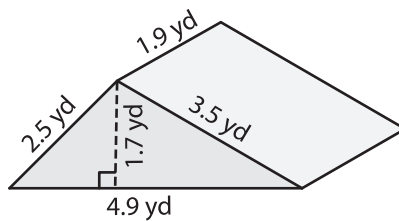
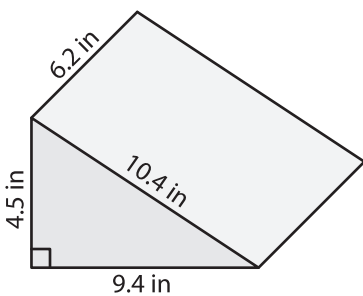
4)



Surface Area = \_\_\_\_\_

Surface Area = \_\_\_\_\_

7)



Surface Area = \_\_\_\_\_

Surface Area = \_\_\_\_\_

Surface Area = \_\_\_\_\_

**PREVIEW**

Gain complete access to the largest collection of worksheets in all subjects!

Members, please log in to download this worksheet.

Not a member? Please sign up to gain complete access.

[www.mathworksheets4kids.com](http://www.mathworksheets4kids.com)