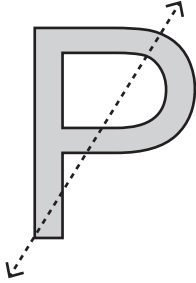


# Symmetry on Letters

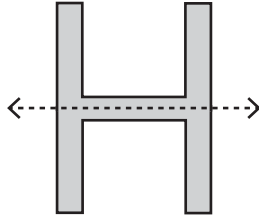
Is the dotted line on each letter a line of symmetry? Write yes or no.

1)

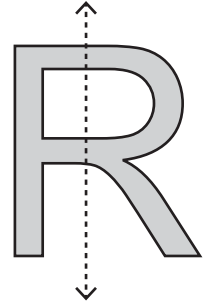


\_\_\_\_\_

2)

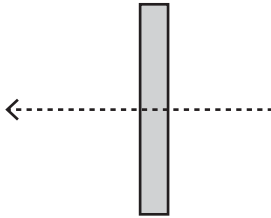


3)



\_\_\_\_\_

4)



\_\_\_\_\_

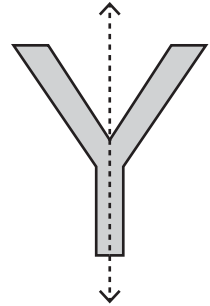
## PREVIEW

Gain complete access to the largest collection of worksheets in all subjects!

Members, please log in to download this worksheet.

Not a member? Please sign up to gain complete access.

[www.mathworksheets4kids.com](http://www.mathworksheets4kids.com)


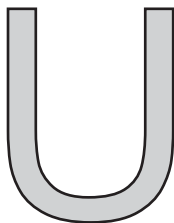


\_\_\_\_\_


Draw a line of symm

ne line of symmetry)

1)



4)



5)



6)

