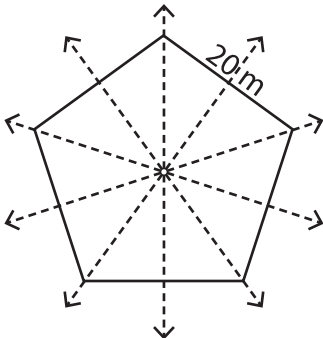


Perimeter of Symmetric Shapes

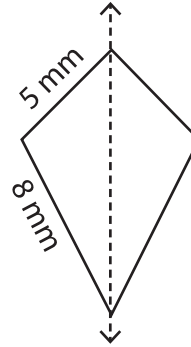
Find the perimeter of each symmetrical shape by using the given information.

1)



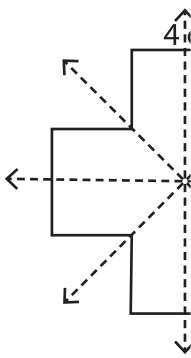
Perimeter: _____

2)

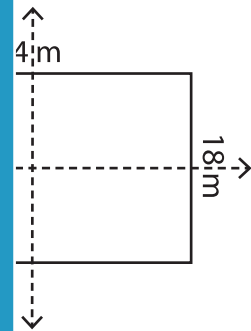


Perimeter: _____

3)

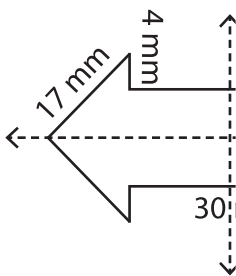


Perimeter: _____

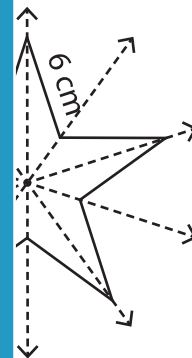


Perimeter: _____

5)



Perimeter: _____



Perimeter: _____

PREVIEW

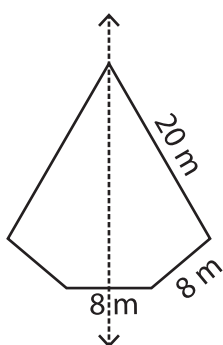
Gain complete access to the largest collection of worksheets in all subjects!

Members, please log in to download this worksheet.

Not a member? Please sign up to gain complete access.

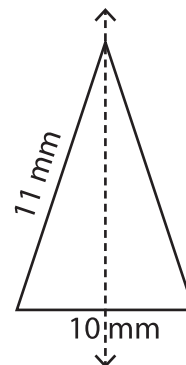
www.mathworksheets4kids.com

7)



Perimeter: _____

8)



Perimeter: _____