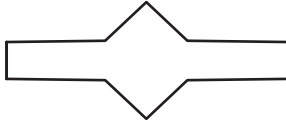



Lines of Symmetry

Draw lines of symmetry on each shape. Count and write the lines of symmetry you see.

1)



2)



3)

PREVIEW

Gain complete access to the largest collection of worksheets in all subjects!

Members, please log in to download this worksheet.

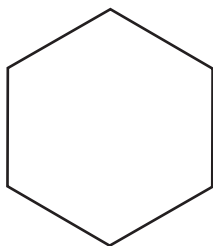
Not a member? Please sign up to gain complete access.

www.mathworksheets4kids.com

5)



7)



8)