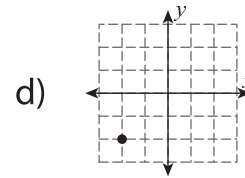
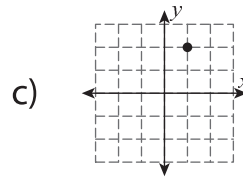
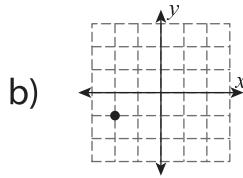
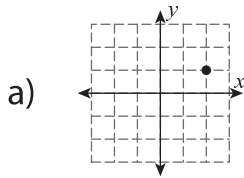
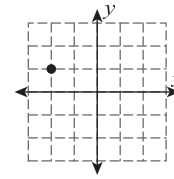
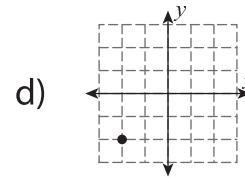
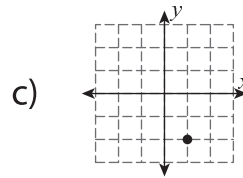
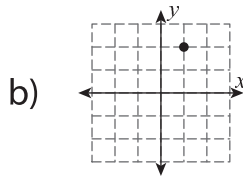
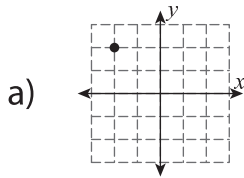
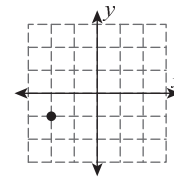


Multiple Choice

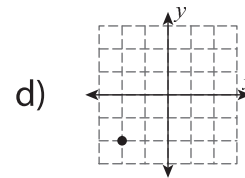
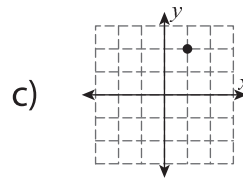
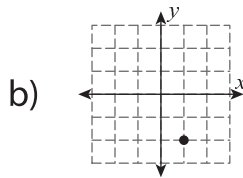
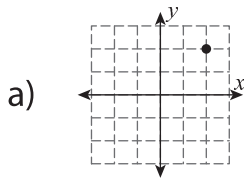
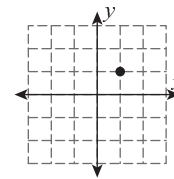
1) What will be the new position of the given point after reflection across the y-axis?



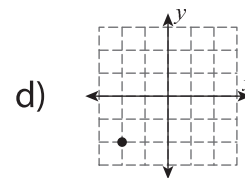
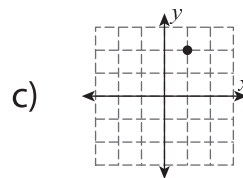
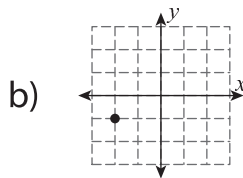
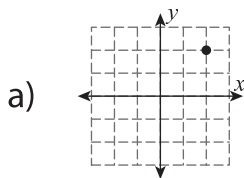
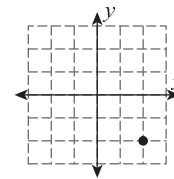
2) What will be the new position of the given point after rotating 90° counterclockwise about the origin?



3) What will be the new position of the given point after translation of 3 units down and 3 units left?



4) What will be the new position of the given point after reflection across the x-axis?



5) What will be the new position of the given point after rotating 90° clockwise about the origin?

