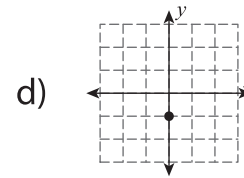
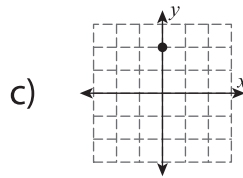
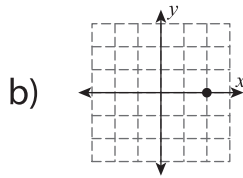
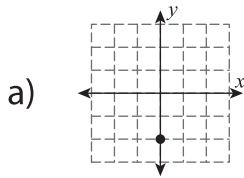
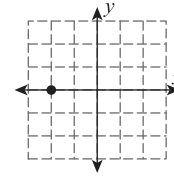
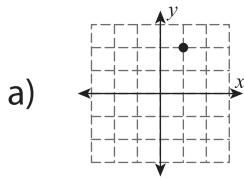
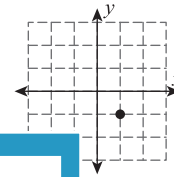


**Multiple Choice**

1) What will be the new position of the given point after rotating  $180^\circ$  about the origin?



2) What will be the new position of the given point after translation of 2 units right and 3 units up?



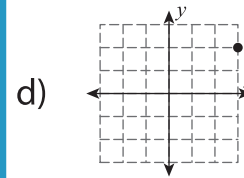
**PREVIEW**

Gain complete access to the largest collection of worksheets in all subjects!

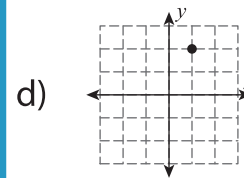
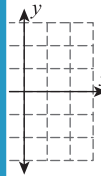
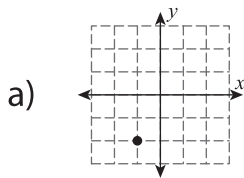
Members, please log in to download this worksheet.

Not a member? Please sign up to gain complete access.

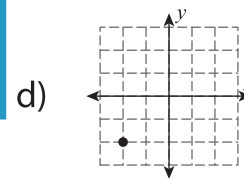
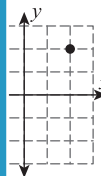
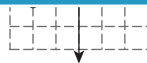
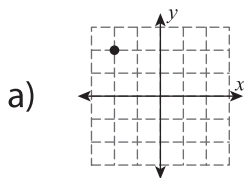
[www.mathworksheets4kids.com](http://www.mathworksheets4kids.com)



3) What will be the reflection across the y-axis of the given point?



4) What will be the new position of the given point after rotating  $90^\circ$  clockwise about the origin?



5) What will be the new position of the given point after translation of 4 units up and 1 unit left?

