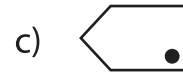
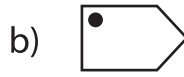
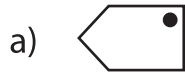


## Multiple Choice

Choose the correct image which shows the transformation of each figure.

1) Reflection of  ?



2) Translation of  ?



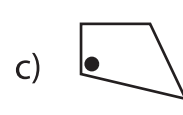
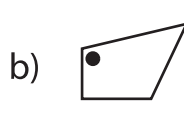
3) Rotation of  ?



4) Reflection of  ?




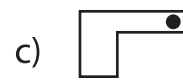
5) Translation of  ?




6) Rotation of  ?



7) Reflection of  ?



8) Translation of  ?

