

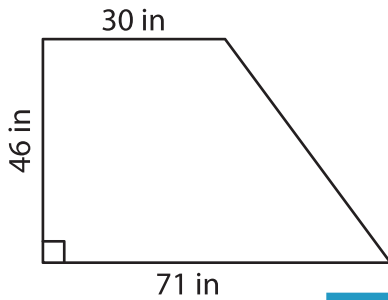
Name : _____

Trapezoid – Area

T2L2S2

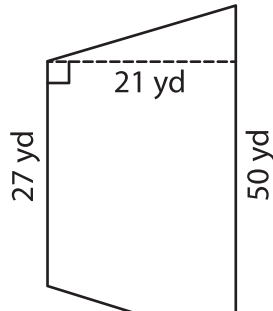
Find the area of each trapezoid.

1)

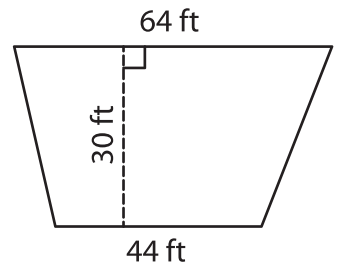


Area = _____

2)

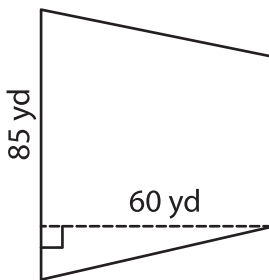


3)



Area = _____

4)



Area = _____

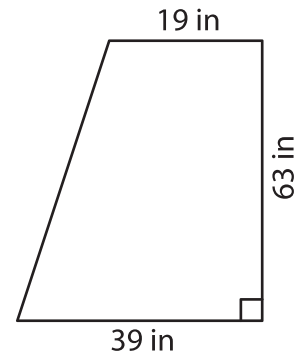
PREVIEW

Gain complete access to the largest collection of worksheets in all subjects!

Members, please log in to download this worksheet.

Not a member? Please sign up to gain complete access.

www.mathworksheets4kids.com



Area = _____

7) The height of a trapezoid is 56 inches and 15 inches, find the area of the trapezoid.

Area = _____

8) The lengths of the parallel bases of a trapezoid are 61 yards and 42 yards. What is the area of the trapezoid, if the height is 57 yards?