

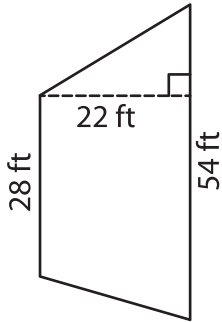
Name : _____

Trapezoid – Area

T2L2S3

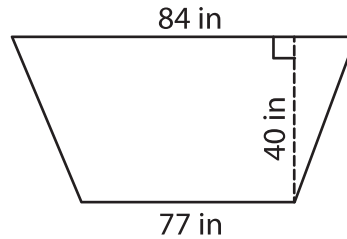
Find the area of each trapezoid.

1)



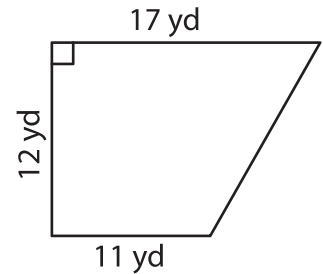
Area = _____

2)

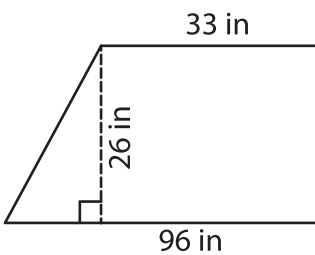


Area = _____

3)



4)



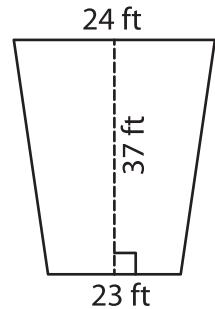
Area = _____

PREVIEW
Gain complete access to the largest collection of worksheets in all subjects!

Members, please log in to download this worksheet.

Not a member? Please sign up to gain complete access.

www.mathworksheets4kids.com



Area = _____

7) The bases of a trapezoid are 41 feet and 57 feet. The height between the bases is 10 feet. What is the area of the trapezoid?

8) The height of a trapezoid is 10 inches. Determine the area of the trapezoid, if the sum of the parallel bases is 93 inches.
