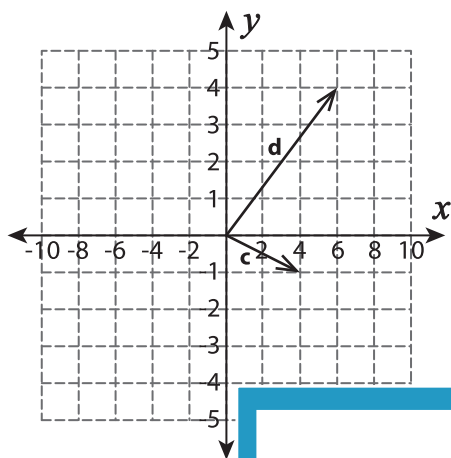


# Resultant of Vectors

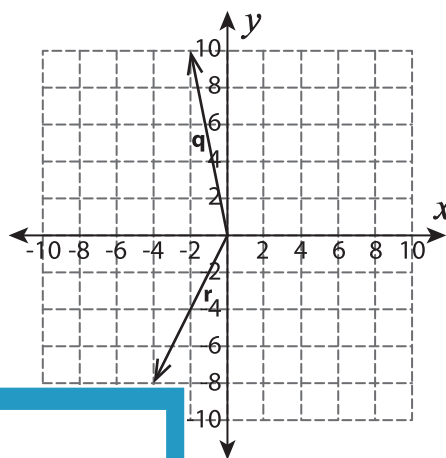
A) Find the resultant of two vectors shown in each graph.

1)



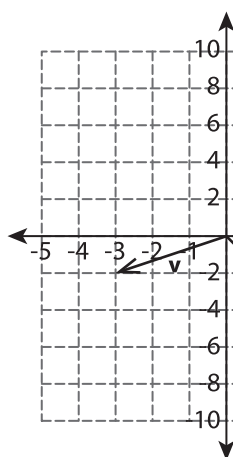
$\vec{c} - \vec{d} =$  \_\_\_\_\_

2)

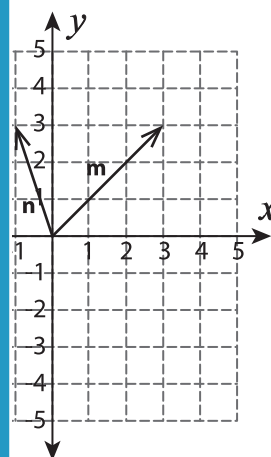


$=$  \_\_\_\_\_

3)



$\vec{v} + \vec{w} =$  \_\_\_\_\_



$=$  \_\_\_\_\_

## PREVIEW

Gain complete access to the largest collection of worksheets in all subjects!

Members, please log in to download this worksheet.

Not a member? Please sign up to gain complete access.

[www.mathworksheets4kids.com](http://www.mathworksheets4kids.com)

B) Which of the fol

