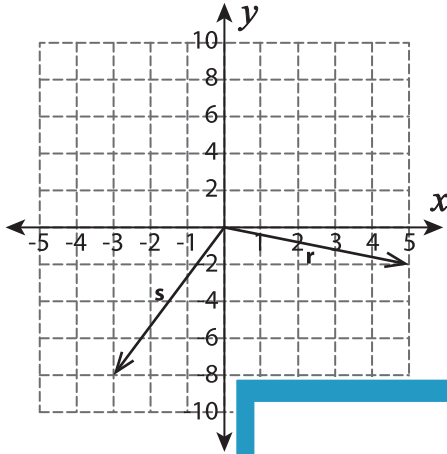


Resultant of Vectors

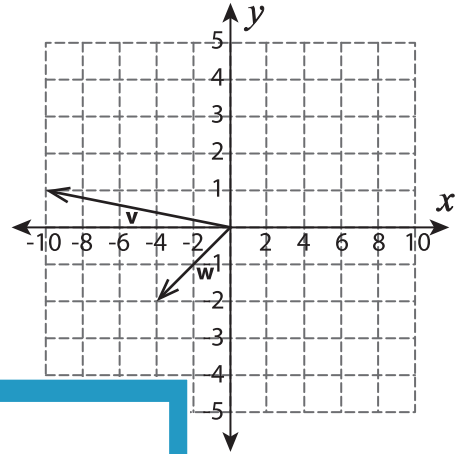
A) Find the resultant of two vectors shown in each graph.

1)



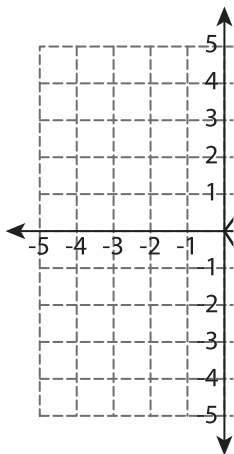
$\vec{r} + \vec{s} =$ _____

2)

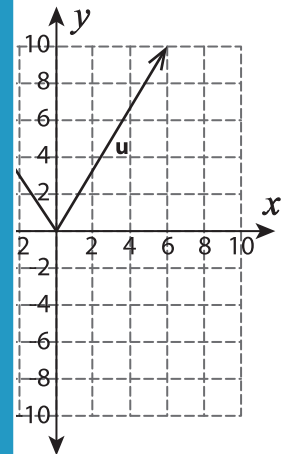


$\vec{v} + \vec{w} =$ _____

3)



$\vec{b} + \vec{c} =$ _____



$\vec{u} =$ _____

PREVIEW

Gain complete access to the largest collection of worksheets in all subjects!

Members, please log in to download this worksheet.

Not a member? Please sign up to gain complete access.

www.mathworksheets4kids.com

B) Which of the fol

