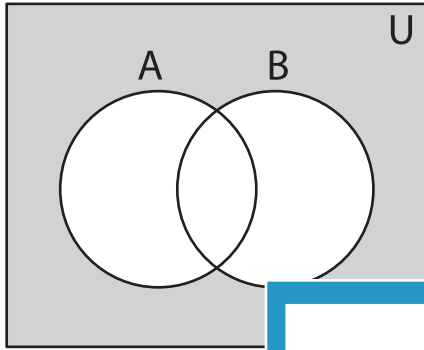


Venn Diagram

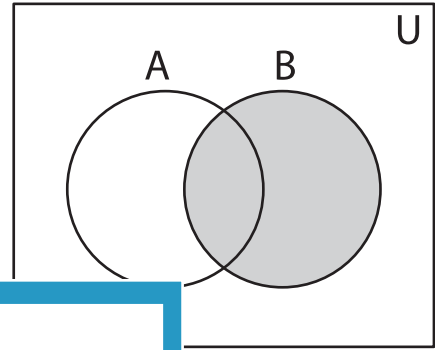
Sheet 4

Determine the shaded region.

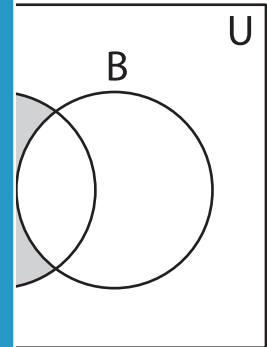
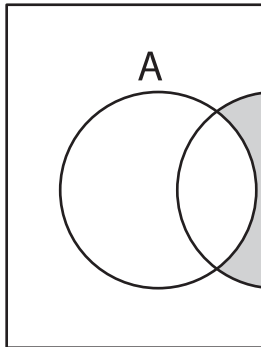
1)



2)



3)



PREVIEW

Gain complete access to the largest
collection of worksheets in all subjects!

Members, please
log in to
download this
worksheet.

Not a member?
Please sign up to
gain complete
access.

www.mathworksheets4kids.com

5)

